



**FOUNDATION WORKSHEET**

**Class: 8**

**Week: 3**

**Subject: English**

**Date: 15/04/2020**

**Name: \_\_\_\_\_**

**Code: ENG-012/15Apr/20-21**

1. Dear students during this time while you are at home, your school is ensuring that your academic work continues and your foundation grows stronger every day.
2. Given is a worksheet which you must complete today.
3. The Answer Key is also given at the end of the exercise. You may ask your parents to check your exercise only after you have completed the worksheet.
4. You can take a printout of the worksheet if possible or you can solve it in any exercise book.
5. You must make one notebook for all the subjects (where you can stick worksheet or you can write).
6. In case of any doubt you can ask your teachers once school will reopen.

\*\*\*\*\*

**Q1. Complete the sentences. Put the verb into the correct form.**

1. It was warm, so I \_\_\_\_\_ off my coat. (**take / took**)
2. The film wasn't very good. I \_\_\_\_\_ it very much. (**enjoy / didn't enjoy**)
3. I knew Sarah was very busy, so I \_\_\_\_\_ her. (**disturb / didn't disturb**)
4. I was very tired, so I \_\_\_\_\_ to bed early. (**go / went**)
5. The bed was very comfortable. I \_\_\_\_\_ very well. (**sleep / didn't sleep**)
6. Sue wasn't hungry, so she \_\_\_\_\_ anything. (**eat / not eat / didn't eat**)
7. We went to Kate's house but she \_\_\_\_\_ at home. (**be / not be / was not**)
8. It was a funny situation but nobody \_\_\_\_\_. (**laugh / was laugh / laughed**)
9. The window was open and a bird \_\_\_\_\_ into the room. (**fly / flew**)
10. The hotel wasn't very expensive. It \_\_\_\_\_ very much. (**cost / not cost / didn't cost**)
11. I was in a hurry, so I \_\_\_\_\_ time to phone you. (**have / not have / didn't have**)
12. It was very hard work carrying the bags. They \_\_\_\_\_ very heavy. (**are / were**)

**Q2. Fill in the blanks with correct form of the verb-**

1. The author of the stories in these books \_\_\_\_\_ Jackie Lander. (**is / are**)
2. Candace, along with her sisters Lucy and Janet, \_\_\_\_\_ at the party. (**was / were**)
3. One typewriter for two or three students \_\_\_\_\_ adequate. (**seems / seem**)

4. This collection of poems \_\_\_\_\_interesting.(**look / looks**)
5. The poems in our literature book \_\_\_\_\_well chosen.(**is / are**)
6. Many lines in the poem \_\_\_\_\_especially good.(**is / are**)
7. The scenes on each village street \_\_\_\_\_again.(**lives / live**)
8. The antics of the old man always \_\_\_\_\_me laugh.(**makes / make**)
9. Kathy, along with her sisters \_\_\_\_\_chicken pox.(**has / have**)
10. A ring of towering mountains \_\_\_\_\_ the valley.(**enclose / encloses**)
11. The cause of her troubles \_\_\_\_\_apparent.(**was / were**)
12. The cut of her clothes \_\_\_\_\_always just right.(**is / are**)
13. This book of short stories \_\_\_\_\_ interesting.(**is / are**)
14. Members of the council \_\_\_\_\_special privileges.(**enjoys / enjoy**)
15. The cats in the alley \_\_\_\_\_wild.(**is / are**)

**Q3. Read the following paragraph aloud. Remember to speak loudly, clearly and confidently. It will help if you first read the paragraph to yourself, and then begin to read it aloud after that. This will benefit you in your verbal communication skills. Enjoy your Read Aloud!**

### April Fool's Day



#### Vocabulary

- ❖ **A fool** – someone who doesn't understand what is happening.
- ❖ **To tease** – laugh at, make fun of someone, joke about something
- ❖ **To play a joke (on someone)** – to do something funny that another person doesn't know about or suspect at first.
- ❖ **Container** – something that holds something else, like a box, a bottle, or a jar.
- ❖ **To play a trick (on someone)** – same as play a joke.

❖ **In the spirit of fun** - with an atmosphere of fun, just for fun, light-hearted.

April Fool's Day started in the sixteenth century in Europe. Before that time, New Year's Day was celebrated on April 1st. Then a new calendar was introduced called the Gregorian calendar. January 1st became the first day of the year, but many people did not know about it. So those who continued to celebrate New Year's Day on April 1st were teased. They were called fools.

Nowadays we play jokes on people on April 1st. For example, someone might put salt in the sugar container so another person could "accidentally" put it in their coffee. Or someone might change the time on another person's alarm clock so that person would unknowingly wake up earlier or later than planned. Or maybe a person would tell a lie to make someone else shocked.

After we play the trick, we say "April Fool." Then the poor person realizes he was fooled. It is generally done in the spirit of fun and doesn't cause any real harm to anyone. Do you have any great jokes to play on anyone today? Try it out. Just don't forget to say "April Fool" when the other person begins looking a little confused.

**Answer Key-**

**Q1. Complete the sentences. Put the verb into the correct form.**

1. took
2. didn't enjoy
3. didn't disturb
4. went
5. didn't sleep
6. didn't eat
7. wasn't
8. laughed
9. flew
10. didn't cost
11. didn't have
12. were

**Q2. Fill in the blanks**

1. is
2. were
3. seems
4. looks
5. are
6. are
7. live
8. makes
9. have
10. enclose
11. was
12. is
13. is
14. enjoy
15. are

\*\*\*\*\*

**Amazon today cancelled the subscription of books and audio stories for children and students of all ages as long as schools are closed. Kids everywhere can instantly stream an incredible collection of stories, including titles across six different languages. All stories are free to stream on your desktop, laptop, phone or tablet using the following-**

**<https://stories.audible.com/start-listen>**

**You are advised to visit the site as well as listen to the audio stories. This will continue to enrich your vocabulary, your Read Aloud skills, and diction, pronunciation and communication skills.**

**All the Best.**



**FOUNDATION WORKSHEET**

**Class: 8**

**Week: 3**

**Subject: Maths**

**Date: 15/04/2020**

**Name: \_\_\_\_\_**

**Code: Maths-012/15apr/20-21**

1. Dear Students during this time while you are at home, your school is ensuring that your academic work continues and your foundation grows stronger every day.
2. Given is a worksheet which you must complete today.
3. The Answer Key is also given at the end of the exercise. You may ask your parents to check your Exercise only after you have completed the worksheet.
4. You can take a printout of the worksheet if possible or you can solve it in any exercise book.
5. You must make one note book for all the subjects (where you can stick worksheet or you can write).
6. In case of any doubt you can ask your teachers once school will reopen.



## Maths Worksheet 012

NAME: \_\_\_\_\_

CLASS: 8 SECTION: \_\_\_\_\_ (III - Week) DATE: 15/04/2020

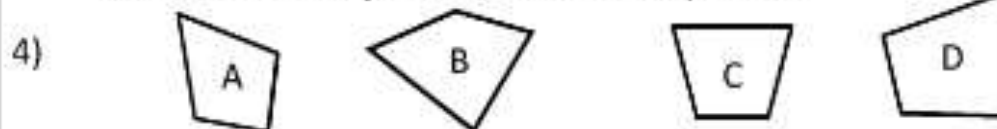
1)  $7 \times 1000 + 8 \times 100 + 5 \times 10 + 2 \times 1$

What fraction and decimal does the number line show?



3) Work out  $(5 + 7) \times (12 - 9)$

Which of these **quadrilaterals** is a trapezoid?



5) Which of these numbers are **prime**?

19 21 23 25 27 29

6) In a spelling test, the scores are as follows: Captain 8, Sally 12, Tyger 7, Quadra 9. What is the **mean** score?

7) What number is halfway between 17 and 29?

8)  $48 \div (15 - 9)$

9) Two numbers have a sum of 15 and a product of 36. What are they?

10)  $7 \times 8 - 5 \times 9$

11) Write 23:40 in 12-hour time.

12) How many vertices does a square pyramid have?

13) The flight time from Houston to London is 9 hours 40 minutes. If I arrive at 4:30pm, what time did I set off?

14) What is the next number? 1.7, 2.1, 2.5, 2.9, \_\_\_\_

15) Tommy weighs 6 stone. Timmy weighs 97 pounds. Who weighs most and by how much?

16) A rectangle has perimeter 22cm and one of the sides is 7cm long. What is the length of the other side?





## Maths Worksheet 012

NAME: \_\_\_\_\_

CLASS: 8 SECTION: \_\_\_\_\_ (III - Week) DATE: 15/04/2020

### Answer

1)	$7 \times 1000 + 8 \times 100 + 5 \times 10 + 2 \times 1$	<b>7852</b>
2)	What fraction and decimal does the number line show? 	<b><math>\frac{3}{4}</math> or 0.6</b>
3)	Work out $(5 + 7) \times (12 - 9)$	<b>36</b>
4)	Which of these <b>quadrilaterals</b> is a trapezoid? 	<b>C</b>
5)	Which of these numbers are <b>prime</b> ? 19 21 23 25 27 29	<b>19, 23, 29</b>
6)	In a spelling test, the scores are as follows: Captain 8, Sally 12, Tyger 7, Quadra 9. What is the <b>mean</b> score?	<b>9</b>
7)	What number is halfway between 17 and 29?	<b>23</b>
8)	$48 \div (15 - 9)$	<b>8</b>
9)	Two numbers have a sum of 15 and a product of 36. What are they?	<b>3 and 12</b>
10)	$7 \times 8 - 5 \times 9$	<b>11</b>
11)	Write 23:40 in 12-hour time.	<b>11:40pm</b>
12)	How many vertices does a square pyramid have?	<b>5</b>
13)	The flight time from Houston to London is 9 hours 40 minutes. If I arrive at 4:30pm, what time did I set off?	<b>6:50am</b>
14)	What is the next number? 1.7, 2.1, 2.5, 2.9, ____	<b>3.3</b>
15)	Tommy weighs 6 stone. Timmy weighs 97 pounds. Who weighs most and by how much?	<b>Timmy: 13 lb more</b>
16)	A rectangle has perimeter 22cm and one of the sides is 7cm long. What is the length of the other side?	<b>4cm</b>





# ROYAL OAKS WORLD SCHOOL

## FOUNDATION WORKSHEET

**Class: 8**

**Week: 3**

**Subject: Science**

**Date: 15/04/2020**

**Name: \_\_\_\_\_**

**Code: Sci-012/15apr/20-21**

1. Dear students during this time while you are at home, your school is ensuring that your academic work continues and your foundation grows stronger every day.
2. Given is a worksheet which you must complete today.
3. The Answer Key is also given at the end of the exercise. You may ask your parents to check your exercise only after you have completed the worksheet.
4. You can take a printout of the worksheet if possible or you can solve it in any exercise book.
5. You must make one notebook for all the subjects (where you can stick worksheet or you can write).
6. In case of any doubt you can ask your teachers once school will reopen.

---

### **A] Multiple Choice Questions.**

1. Which of the following crops would enrich the soil with nitrogen?
  - a) Apple
  - b) Pea
  - c) Paddy
2. In agriculture, broadcasting is used for\_\_\_\_\_
  - a) Rotating the crops
  - b) Ploughing the fields
  - c) Sowing the seeds
3. Which of the following is not a Rabi crop?
  - a) Soyabean
  - b) Peas
  - c) Wheat

4. Which of the following cannot be provided to the soil by a chemical fertilizer?

- a) Nitrogen
- b) Humus
- c) Potassium

5. The process of beating out grains from the harvested wheat crop is called\_\_\_\_\_.

- a) Beating
- b) Crushing
- c) Threshing

6. The food obtained from animals is very rich in \_\_\_\_\_.

- a) Fats
- b) Carbohydrates
- c) Proteins

7. The Government Agency responsible for purchasing grains from the farmers, safe storage and distribution is\_\_\_\_\_.

- a) CBI
- b) FBI
- c) FCI

8. Poultry gives us \_\_\_\_\_.

- a) Eggs
- b) Meat
- c) Both a and b

**B] Match the following.**

**Column A**

1. Kharif crops
2. Chemical fertilizers
3. Organic manure
4. Rabi crop
5. Fodder

**Column B**

- a) Food for cattle
- b) Wheat, gram, pea
- c) Animal excreta and plant waste
- d) Urea and Superphosphate
- e) Paddy and maize

**C] Arrange the following practices in the correct order as they appear in the sugarcane crop production.**

1. Sending crop to sugar factory
2. Irrigation
3. Harvesting
4. Sowing
5. Manuring
6. Ploughing the field

**D] Name two traditional and two modern methods for irrigation.**

Sr. No.	Traditional Methods	Modern Methods
1		
2		

## Answer Key

A]

1. Pea
2. Sowing the seeds
3. Soyabean
4. Humus
5. Threshing
6. Proteins
7. FCI
8. Both a and b

B]

1. Paddy and maize
2. Urea and superphosphate
3. Animal excreta and plant waste
4. Wheat, Gram and peas
5. Food for cattle

C]

1. Ploughing the field
2. Sowing
3. Manuring
4. Irrigation
5. Harvesting
6. Sending crop to sugar factory

D]

<b>Sr. No.</b>	<b>Traditional Methods</b>	<b>Modern Methods</b>
<b>1</b>	Moat	Sprinkler system
<b>2</b>	Dhekli	Drip system

FOUNDATION WORKSHEET

Class: 8

Week3

Subject: Hindi

Date: 15-04-2020

Name: \_\_\_\_\_

Code: HIN-012/15Apr/20-21

1. Dear students during this time while you are at home your school is insuring that your academic work continues and your foundation grows stronger every day.
2. Given is a worksheet which you must complete today.
3. The answer key is given at the end of the exercise. You may ask your parents to check your exercise only after you have completed the worksheet.
4. You can take a printout of the worksheet if possible you can solve it any exercise book.
5. You must make 1 notebook of all the subjects (where you can stick worksheets or you can write).
6. In case of any doubt you can ask your teacher when school will reopen.

प्रश्न १) रिक्त स्थानों की पूर्ति कीजिए ।

[ भविष्यकाल ,वर्तमानकाल ,भूतकाल ]

- १) क्रिया पहले ही समाप्त हो चुकी हो उसे \_\_\_\_\_ कहते हैं।
- २) जो क्रिया आने वाले समय में होंगी उसे \_\_\_\_\_ करते हैं।
- ३) जो क्रिया वर्तमान समय में चल रही हो उसे \_\_\_\_\_ करते हैं ।

प्रश्न २) दिए गए वाक्यों के काल पहचानिए ।

- १) पुजारी पूजा कर रहा है। = \_\_\_\_\_
- २) मैंने पुस्तक पढ़ ली थी। = \_\_\_\_\_
- ३) किसान खेत में बीज बोएगा। = \_\_\_\_\_
- ४) हम सर्कस देखने जाएंगे। = \_\_\_\_\_
- ५) वह खाना खा चुका था। = \_\_\_\_\_
- ६) पिताजी समाचार सुन रहे हैं। = \_\_\_\_\_
- ७) जय ने अपना पाठ याद कर लिया। = \_\_\_\_\_

८)श्री राम ने रावण को मारा। = \_\_\_\_\_

९)देव कल घर जाएगा। = \_\_\_\_\_

१०)बच्चे खेल रहे थे। = \_\_\_\_\_

प्रश्न ३)नीचे दिए गए वाक्यों के काल बदलिए।

१)मैं पूजा कर रहा हूँ।( भूत काल)= \_\_\_\_\_

२) सुहान खाना खा चुका था।( वर्तमान काल)= \_\_\_\_\_

३)पिताजी ने समाचार पत्र पढ़ा।( भविष्य काल)= \_\_\_\_\_

४)गाड़ी चल रही थी । (वर्तमान काल)= \_\_\_\_\_

५)वह हॉकी खेल रहा है।(भविष्य काल)= \_\_\_\_\_

६)मैं सर्कस देखूंगा। (भूतकाल)= \_\_\_\_\_

उत्तर सूची:-

प्रश्न १) १) भूतकाल २) भविष्यकाल ३) वर्तमानकाल

प्रश्न २) १) वर्तमानकाल २) भूतकाल ३) भविष्यकाल ४) भविष्यकाल ५) भूतकाल  
६) वर्तमानकाल ७) भूतकाल ८) भूतकाल ९) भविष्यकाल १०) भूतकाल

प्रश्न ३) १) मैं पूजा कर चुका हूँ ।

२) सुहान खाना खा रहा है।

३) पिताजी समाचार पत्र पढ़ेंगे।

४) गाड़ी चल रही है।

५) वह हॉकी खेलेगा।

६) मैं सर्कस देख चुका हूँ।