



FOUNDATION WORKSHEET

Class: 8

Week: 3

Subject: English

Date: 13/04/2020

Name: _____

Code: ENG-010/13Apr/20-21

1. Dear students during this time while you are at home, your school is ensuring that your academic work continues and your foundation grows stronger every day.
2. Given is a worksheet which you must complete today.
3. The Answer Key is also given at the end of the exercise. You may ask your parents to check your exercise only after you have completed the worksheet.
4. You can take a printout of the worksheet if possible or you can solve it in any exercise book.
5. You must make one notebook for all the subjects (where you can stick worksheet or you can write).
6. In case of any doubt you can ask your teachers once school will reopen.

Q1. Complete the sentences in reported speech.

1. He said, "I like this song".

2. "Where is your sister?" she asked me.

3. "I don't speak Italian," she said.

4. "Say hello to Jim," they said.

5. "The film began at seven o'clock," he said.

6. "Don't play on the grass, boys" she said.

7. "Where have you spent your money?" She asked him.

8. "I never make mistakes," he said.

9. "Does she know Robert?" he wanted to know.

10. "Don't try this at home," the stuntman told the audience.

11. Jessica said, "Don't play football in the garden."

12. She said, "Don't sing that song."

13. Hanna said, "Don't go to the cinema."

14. Tom said, "Don't ring me on Sunday."

15. Teacher said, "Do your homework."

16. Andrew said, "Wash the dishes."

17. Jessica said, "Write a letter."

18. Sarah said, "Help Peter's sister."

19. Linda asked, "Did he fly to Paris two weeks ago?"

20. Anna said, "Open the window."

Answer Key-

1. He said that he liked that song.
2. She asked me where my sister was.
3. She said that they didn't speak Italian.
4. They asked me to say hello to Jim.
5. He said that the film had begun at 7 o'clock.
6. She told the boys not to play on the grass.
7. She asked him where he had spent his money.
8. He said that he never makes mistakes.
9. He wanted to know if she knew Robert.
10. The stuntman advised the audience not to try that at home.
11. Jessica told me not to play football in the garden.
12. She told me not to sing that song.
13. Hanna told me not to go to the cinema.
14. Tom told me not to ring him on Sunday.
15. The teacher told me to do my homework.
16. Andrew told me to wash the dishes.
17. Jessica told me to write a letter.
18. Sara told me to help Peter's sister.
19. Linda asked me if he had flown to Paris two weeks ago.
20. Anna told me to open the window.

Amazon today cancelled the subscription of books and audio stories for children and students of all ages as long as schools are closed. Kids everywhere can instantly stream an incredible collection of stories, including titles across six different languages. All stories are free to stream on your desktop, laptop, phone or tablet using the following-

<https://stories.audible.com/start-listen>

You are advised to visit the site as well as listen to the audio stories. This will continue to enrich your vocabulary, your Read Aloud skills, and diction, pronunciation and communication skills.

All the Best.

FOUNDATION WORKSHEET**Class: 8****Week: 3****Subject: Maths****Date: 13/04/2020****Name: _____****Code: Maths-010/13apr/20-21**

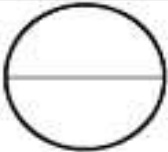



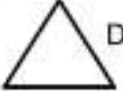
1. Dear Students during this time while you are at home, your school is ensuring that your academic work continues and your foundation grows stronger every day.
2. Given is a worksheet which you must complete today.
3. The Answer Key is also given at the end of the exercise. You may ask your parents to check your Exercise only after you have completed the worksheet.
4. You can take a printout of the worksheet if possible or you can solve it in any exercise book.
5. You must make one note book for all the subjects (where you can stick worksheet or you can write).
6. In case of any doubt you can ask your teachers once school will reopen.



Maths Worksheet 10

NAME: _____

CLASS: 8 SECTION: _____ (III - Week) DATE: 13/04/2020

1)	60×8	
2)	$1 - \underline{\hspace{1cm}} = 0.72$	
3)	$\frac{2}{5}$ of 24	
4)	$10 \times (7 + 6)$	
5)	Find the value of y if $y - 8 = 15$.	
6)	What is this part of the circle called? <i>diameter radius circumference sector</i>	
7)	$4\frac{1}{4} + 3 + 5\frac{1}{2}$	
8)	In a class, $\frac{2}{3}$ of the children like football. What fraction do not like football?	
9)	I am a triangle with 1 obtuse and 2 acute angles. Who am I? A  B  C  D 	
10)	What are the next two numbers: 1, 3, 6, 10, 15, 21, __, __	
11)	What is the probability of rolling a 3 on a 6-sided dice?	
12)	Entry to a zoo costs \$30 for an adult and \$25 for a child. How much would it cost for 2 adults and 3 children?	
13)	Five children play a computer game and score 12, 15, 7, 8 and 10 points. What is the median score?	
14)	A paperclip is made out of 4 inches of wire. How many paperclips could I make with 5ft of wire?	
15)	I travel at 50 miles per hour for 4 hours. How far have I gone?	
16)	A train journey takes 3h 40min. If I arrive at 1:30pm, what time did I set off?	

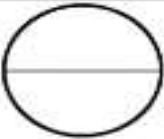






Maths Worksheet 10

NAME: _____

CLASS: 8 SECTION: _____ (III - Week) DATE: 13/04/2020

Answer

1)	60×8	480
2)	$1 - \underline{\hspace{1cm}} = 0.72$	0.28
3)	$\frac{2}{3}$ of 24	16
4)	$10 \times (7 + 6)$	130
5)	Find the value of y if $y - 8 = 15$.	23
6)	What is this part of the circle called? <i>diameter radius circumference sector</i> 	diameter
7)	$4\frac{1}{4} + 3 + 5\frac{1}{2}$	$12\frac{3}{4}$
8)	In a class, $\frac{2}{3}$ of the children like football. What fraction do not like football?	$\frac{1}{3}$
9)	I am a triangle with 1 obtuse and 2 acute angles. Who am I? A  B  C  D 	B
10)	What are the next two numbers: 1, 3, 6, 10, 15, 21, __, __	28, 36
11)	What is the probability of rolling a 3 on a 6-sided dice?	$\frac{1}{6}$
12)	Entry to a zoo costs \$30 for an adult and \$25 for a child. How much would it cost for 2 adults and 3 children?	\$135
13)	Five children play a computer game and score 12, 15, 7, 8 and 10 points. What is the median score?	10
14)	A paperclip is made out of 4 inches of wire. How many paperclips could I make with 5ft of wire?	15
15)	I travel at 50 miles per hour for 4 hours. How far have I gone?	200 miles
16)	A train journey takes 3h 40min. If I arrive at 1:30pm, what time did I set off?	9:50am



FOUNDATION WORKSHEET

Class: 8

Week: 3

Subject: Science

Date: 13/04/2020

Name: _____

Code: Sci-010/13apr/20-21

1. Dear students during this time while you are at home, your school is ensuring that your academic work continues and your foundation grows stronger every day.
2. Given is a worksheet which you must complete today.
3. The Answer Key is also given at the end of the exercise. You may ask your parents to check your exercise only after you have completed the worksheet.
4. You can take a printout of the worksheet if possible or you can solve it in any exercise book.
5. You must make one notebook for all the subjects (where you can stick worksheet or you can write).
6. In case of any doubt you can ask your teachers once school will reopen.

A]

ACTIVITY TIME

Aim - Separate healthy seeds from unhealthy seeds.

- Half fill a beaker or glass with water.
- Put some wheat/ rice/pulses seeds in it and stir.
- Wait for some time.
- Do some of the seeds settle down and others float in the water, why?

1. Write your observation.

2. According to you which seeds are healthy?

3. What will happen if farmers sow the seeds which are unhealthy and not of good quality?

{Note: You can even click your photos while doing your experiment and send it on school phone number.}

B] VALUE BASED QUESTION:-

Mohan and Sohan are farmers in Rajasthan where there is shortage of water.

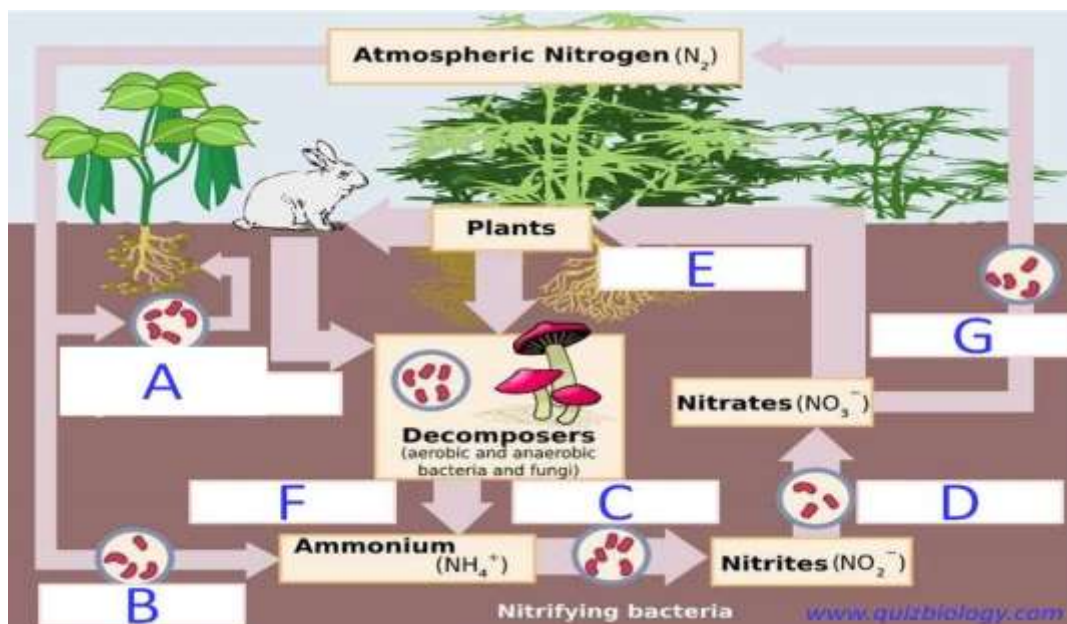
Mohan waters his crop through irrigation channels connected to a tube well.

Sohan uses drip irrigation.

1. Which of them shows greater concern for the environment and how?

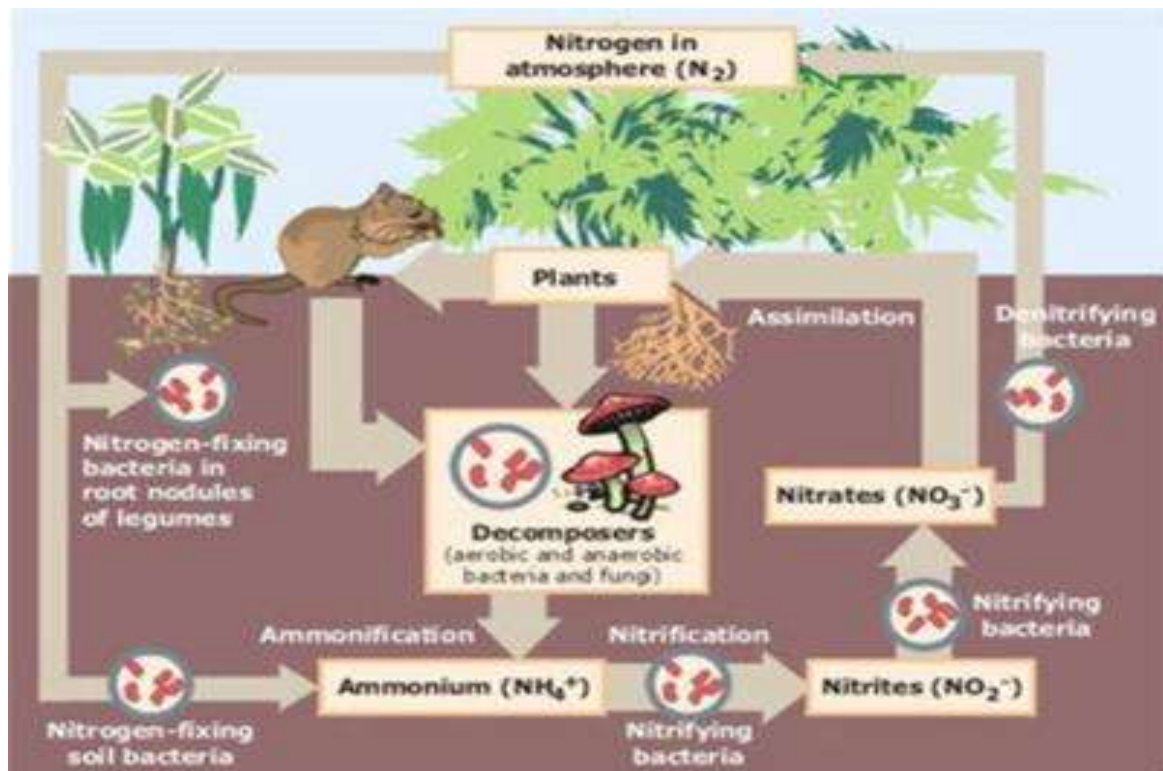
2. Which crops farmers can grow in such dry regions?

C] Label the given Nitrogen Cycle and practice it again in your notebook.



Answer Key

C]



FOUNDATION WORKSHEET

Class: 8

Week 3

Subject: Hindi

Date: 13-04-2020

Name: _____

Code: HIN-010/13Apr/20-21

1. Dear students during this time while you are at home your school is insuring that your academic work continues and your foundation grows stronger every day.
2. Given is a worksheet which you must complete today.
3. The answer key is given at the end of the exercise. You may ask your parents to check your exercise only after you have completed the worksheet.
4. You can take a printout of the worksheet if possible you can solve it any exercise book.
5. You must make 1 notebook of all the subjects (where you can stick worksheets or you can write).
6. In case of any doubt you can ask your teacher when school will reopen.

संज्ञा या सर्वनाम की विशेषता बताने वाले शब्द **विशेषण** कहलाते हैं।

प्रश्न १) रिक्त स्थान की पूर्ति कीजिए ।

[संख्यावाचक, गुणवाचक, सर्वनामिक, परिमाणवाचक, अनिश्चितवाचक]

१) जो विशेषण संज्ञा या सर्वनाम के रंग, रूप, दोष आदि का बोध कराते हैं उसे _____ विशेषण कहते हैं।

२) ऐसे शब्द जो संज्ञा या सर्वनाम की संख्या के बारे में बताते हैं उसे _____ विशेषण कहते हैं।

३) जो सर्वनाम शब्द संज्ञा के पहले आकर संज्ञा की विशेषता बताते हैं उसे _____ विशेषण कहते हैं।

४) जो शब्द संज्ञा या सर्वनाम की मात्रा बताते हैं उसे _____ विशेषण कहते हैं।

५) जब संज्ञा या सर्वनाम के किसी बात का निश्चित अनुमान न हो तो उसे _____ विशेषण कहते हैं।

प्रश्न २) निम्नलिखित वाक्यों में विशेषण पहचानिए ।

- १) हेमा बहुत ही सुंदर लड़की है। - _____
- २) जय एक मेहनती विद्यार्थी है। - _____
- ३) जयपुर को गुलाबी शहर कहा जाता है। - _____
- ४) मुझे अंदरूनी चोट लगी है। - _____
- ५) मुझे भारतीय खाना पसंद है। - _____
- ६) सायली कक्षा में अव्वल आती है। - _____
- ७) मीना ने आज चार केले खाए। - _____
- ८) सुहान एक इमानदार छात्र है। - _____
- ९) तुम किस प्रश्न के बारे में पूछ रहे हो। - _____
- १०) देव ने कुछ फल खरीदे। - _____

प्रश्न २) लिंग बदलिए।

- १) पहाड़ = _____
- २) भतीजा = _____
- ३) मेंढक = _____
- ४) मोर = _____
- ५) मुर्गा = _____

उत्तर सूची:-

प्रश्न १) १) गुणवाचक २) संख्यावाचक ३) सार्वनामिक ४) परिमाणवाचक ५) अनिश्चित

प्रश्न २) १) सुंदर २) मेहनती ३) गुलाबी ४) अंदरूनी ५) भारतीय

६) यह ७) चार ८) ईमानदार ९) किस १०) कुछ

प्रश्न ३) १) पहाड़ी २) भतीजी ३) मेंढकी ४) मोरनी ५) मुर्गी