



ROYAL OAKS WORLD SCHOOL

FOUNDATION WORKSHEET

Class: 6

Week: 3

Subject: English

Date: 15/04/2020

Name: _____

Code: ENG-012/15apr/20-21

1. Dear students during this time while you are at home, your school is ensuring that your academic work continues and your foundation grows stronger every day.
2. Given is a worksheet which you must complete today.
3. The Answer Key is also given at the end of the exercise. You may ask your parents to check your exercise only after you have completed the worksheet.
4. You can take a printout of the worksheet if possible or you can solve it in any exercise book.
5. You must make one notebook for all the subjects (where you can stick worksheet or you can write).
6. In case of any doubt you can ask your teachers once school will reopen.

Q.1. Fill in the blanks with the correct form of the verb as indicated in the brackets:

- 1) He _____ of an education system, which will generate a new human being. (to dream - Simple Past Tense)
- 2) I think global understanding _____. (to change - Past Perfect Tense)
- 3) Technology _____ changed not only the artists' view but also of listeners. (to help - Present Perfect Tense)
- 4) The movie _____ the environmental destructions caused by the farmers. (to depict - Simple Present Tense)
- 5) I _____ some young friends who are budding herpetologists. (to assist - Present Perfect Progressive Tense)
- 6) She _____ also the Seven Summits of the world. (to conquer - Present Perfect Tense)
- 7) All the birds _____ silent as the mist comes climbing up the hill. (to fall - Simple Present Tense)
- 8) The rains _____ the arrivals of some seasonal visitors. (to herald - Present Perfect Tense)
- 9) I _____ the tinkle of cow bells. (to hear - Simple Present Tense)
- 10) They _____ it difficult to stay focused. (to find - Simple Past Tense)

Q.2. Identify the verb in the following sentences and state the tense in which each verb is.

- 1) Mint has been used for many centuries.
- 2) A young woman garlands me.

- 3) The train has had several incarnations.
- 4) Ranthambore National Park is the best known of India's 39 tiger reserves.
- 5) The reserves have not been a success.
- 6) These men bring us tea.
- 7) "You'll come back," he says, "and see a tiger. I'm sure."
- 8) The gate opens into a plain which has the Rajal lake.
- 9) I have never asked people to do anything, which I first did not practise in my life.
- 10) The shower of praise enlivened their spirits.

Answer key

Q.1. Fill in the blanks with the correct form of the verb as indicated in the brackets:

1) dreamt, 2) had changed, 3) has helped, 4) depicts, 5) have been assisting,

6) has conquered, 7) fall, 8) have heralded, 9) hear, 10) found.

Q.2. Identify the verb in the following sentences and state the tense in which each verb is.

1) has been used - Present Perfect Tense

2) garlands - Simple Present Tense

3) has had - Present Perfect Tense

4) is - Simple Present Tense

5) have been - Present Perfect Tense

6) bring - Simple Present Tense

7) will come - Simple Future Tense, says, am, sure - Simple Present Tense

8) opens - Simple Present Tense

9) have asked - Present Perfect Tense

10) enlivened - Simple Past Tense.

Greetings from Royal Oaks World School

Amazon today cancelled the subscription of books and audio stories for children and students of all ages as long as schools are closed, kids everywhere can instantly stream an incredible collection of stories, including titles across six different languages.

All stories are free to stream on your desktop, laptop, phone or table using the following:

<https://stories.audible.com/start-listen>

FOUNDATION WORKSHEET

Class: 6

Subject: Hindi

Name: _____

Week 3

Date: 15-04-2020

Code: HIN-012/15Apr/20-21

1. Dear students during this time while you are at home your school is insuring that your academic work continues and your foundation grows stronger every day.
2. Given is a worksheet which you must complete today.
3. The answer key is given at the end of the exercise. You may ask your parents to check your exercise only after you have completed the worksheet.
4. You can take a printout of the worksheet if possible you can solve it any exercise book.
5. You must make 1 notebook of all the subjects (where you can stick worksheets or you can write).
6. In case of any doubt you can ask your teacher when school will reopen.

प्रश्न १) उपसर्ग अलग कीजिए ।

उदाहरण नासमझ = ना + समझ

१) अतिशय = _____ + _____

२) अधिपति = _____ + _____

३) अनुकरण = _____ + _____

४) अभिनंदन = _____ + _____

५) आजन्म = _____ + _____

६) विफल = _____ + _____

७) परिपूर्ण = _____ + _____

८) पराजय = _____ + _____

९) सुशिक्षित = _____ + _____

१०) उपग्रह = _____ + _____

प्रश्न २) उपसर्ग सही शब्द से मिलाइए।

१)अनु	१) कंठ
२)आ	२)करण
३)अभि	३)दिन
४)प्रति	३)नय
५)स	५)चार
६)कम	६)फल
७)बद	७)जोर
८)ला	८)नाम
९)सर	९)राह
१०)हम	१०)पंच

उत्तर सूची:-

प्रश्न १) अति+शय २)अधि+पति ३)अनु+करण ४)अभि+नंदन ५)आ+जन्म
६)वि+फल ७)परि+पूर्ण ८)परा+जय ९)सु+शिक्षित १०)उपग्रह

प्रश्न २)१) अनुकरण २)आकंठ ३)अभिनय ४) प्रतिदिन ५) सुफल
६)कमजोर ७)बदनाम ८) लाचार ९) सरपंच १०)हमराह

FOUNDATION WORKSHEET**Class: 6****Week: 3****Subject: Maths****Date: 15/04/2020****Name: _____****Code: Maths-012/15apr/20-21**






1. Dear Students during this time while you are at home, your school is ensuring that your academic work continues and your foundation grows stronger every day.
2. Given is a worksheet which you must complete today.
3. The Answer Key is also given at the end of the exercise. You may ask your parents to check your Exercise only after you have completed the worksheet.
4. You can take a printout of the worksheet if possible or you can solve it in any exercise book.
5. You must make one note book for all the subjects (where you can stick worksheet or you can write).
6. In case of any doubt you can ask your teachers once school will reopen.



Maths Worksheet 12

NAME: _____

CLASS: 6 SECTION: _____ (III - Week) DATE: 15/04/2020

1)	Find $\frac{6}{7}$ of 35	
2)	Write seven-tenths two-hundredths as a decimal.	
3)	Add 0.4, 0.7 and 1.2	
4)	What is the mode of 14, 12, 8, 10, 12, 9, 11?	
5)	Round 6.398 to the nearest whole number	
6)	How many fourths make $2\frac{1}{2}$?	
7)	What 3d shape is this the net for? 	
8)	Which of these quadrilaterals is a kite? A  B  C  D 	
9)	How many sides does a heptagon have?	
10)	A 6-pound joint of lamb needs to be cooked for 20 minutes plus 25 minutes per pound. How long does it need cooking for?	__h __min
11)	Work out $72 \div (4\frac{1}{2} + 7\frac{1}{2})$	
12)	The diameter of Pluto is 1430 miles. What is the radius?	
13)	Write the time 16:25 in 12-hour clock time.	
14)	The area of a square is 36cm^2 . What is the perimeter of the square?	
15)	A long piece of ribbon measures 1m. I cut off 10 pieces each measuring 8.5cm. How much of the ribbon is left?	
16)	How many nickels would I need to make \$2.30?	

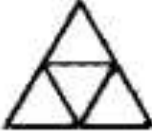



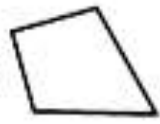


Maths Worksheet 12

NAME: _____

CLASS: 6 SECTION: _____ (III - Week) DATE: 15/04/2020

Answer

1)	Find $\frac{5}{7}$ of 35	30
2)	Write seven-tenths two-hundredths as a decimal.	0.72
3)	Add 0.4, 0.7 and 1.2	2.3
4)	What is the mode of 14, 12, 8, 10, 12, 9, 11?	12
5)	Round 6.398 to the nearest whole number	6
6)	How many fourths make $2\frac{1}{2}$?	10
7)	What 3d shape is this the net for? 	triangular pyramid/ tetrahedron
8)	Which of these quadrilaterals is a kite? A  B  C  D 	A
9)	How many sides does a heptagon have?	7
10)	A 6-pound joint of lamb needs to be cooked for 20 minutes plus 25 minutes per pound. How long does it need cooking for?	2h 50min
11)	Work out $72 \div (4\frac{1}{2} + 7\frac{1}{2})$	6
12)	The diameter of Pluto is 1430 miles. What is the radius?	715 miles
13)	Write the time 16:25 in 12-hour clock time.	4:25pm
14)	The area of a square is 36cm^2 . What is the perimeter of the square?	24cm
15)	A long piece of ribbon measures 1m. I cut off 10 pieces each measuring 8.5cm. How much of the ribbon is left?	15cm
16)	How many nickels would I need to make \$2.30?	46

FOUNDATION WORKSHEET**Class: 6****Subject: Science****Name: _____****Week: 3****Date: 15/04/2020****Code: SCI-012/15apr/20-21**

1. Dear students during this time while you are at home, your school is ensuring that your academic work continues and your foundation grows stronger every day.
2. Given is a worksheet which you must complete today.
3. The Answer Key is also given at the end of the exercise. You may ask your parents to check your exercise only after you have completed the worksheet.
4. You can take a printout of the worksheet if possible or you can solve it in any exercise book.
5. You must make one notebook for all the subjects (where you can stick worksheet or you can write).
6. In case of any doubt you can ask your teachers once school will reopen.

SELECT THE CORRECT ANSWER FROM THE GIVEN OPTIONS.

1. Which one is a transparent object?
 - a. Stone
 - b. Reading glass
 - c. Wax paper
 - d. Dense fog
2. Light is a form of
 - a. Energy
 - b. Power
 - c. Mass
 - d. Length
3. Which of the following will not form circular shadow
 - a. A circular disk
 - b. Shoe box
 - c. Ice-cream cone
 - d. A ball
4. Shadow is formed by
 - a. Transparent object
 - b. Translucent object
 - c. Opaque object
 - d. All of these.

5. Match the following:

Column A	Column B
a. Moon	i. Translucent
b. Sun	ii. Opaque
c. Brick	iii. Reflecting surface
d. Mirror	iv. Luminous
e. Tracing paper	v. Non-luminous

6. Fill in the blanks with suitable word.

- _____object do not cast any shadow.
- Moon is a_____object.
- Shadows give us information about the_____of the object.
- Solar and Lunar eclipse are examples of_____formation in nature.
- A_____changes the direction of light that falls on it.

7. When does a lunar eclipse occur?

8. Draw diagram of Lunar eclipse.

9. Draw diagram of Solar eclipse.

10. Classify the following as transparent, translucent and opaque object.


Brick, butter paper, air, cardboard, metals, book, smoked glass, water, cellophane paper.

Transparent	Translucent	Opaque

Answer key

1. (b)
2. (a)
3. (b)
4. (c)
5. (a) – (v), (b) – (iv), (c) – (ii), (d) – (iii), (e) – (i).
6. (a) Transparent (b) Non-luminous (c) Shape (d) Shadow (e) Mirror.
7. A lunar eclipse occurs when the earth is between the sun and the moon in a straight line.
The shadow of the earth is cast on the moon.

8.



9. lunar eclipse



10. solar eclipse

Transparent	Translucent	Opaque
Air	Butter paper	Brick
Water	Smoked glass	Cardboard
Cellophane paper		Metals