

**FOUNDATION WORKSHEET****Class: 7****Week: 3****Subject: English****Date: 15/04/2020****Name: \_\_\_\_\_****Code: ENG-012/15Apr/20-21**

1. Dear students during this time while you are at home, your school is ensuring that your academic work continues and your foundation grows stronger every day.
2. Given is a worksheet which you must complete today.
3. The Answer Key is also given at the end of the exercise. You may ask your parents to check your exercise only after you have completed the worksheet.
4. You can take a printout of the worksheet if possible or you can solve it in any exercise book.
5. You must make one notebook for all the subjects (where you can stick worksheet or you can write).
6. In case of any doubt you can ask your teachers once school will reopen.

\*\*\*\*\*

**Q1. Fill in the blanks with correct options-**

1. My friend \_\_\_\_\_ for about a month. (is ill / has been ill / has ill)
2. He said that he \_\_\_\_\_ her last year. (saw / had seen / either could be used)
3. I \_\_\_\_\_ my work before he came to see me. (finished / had finished / either could be used)
4. He \_\_\_\_\_ before his mother arrived. (left / had left / either could be used)
5. The show \_\_\_\_\_ before we reached the venue. (began / had begun / either could be used)
6. He \_\_\_\_\_ his wealth shortly after he \_\_\_\_\_ it. (squandered away, had inherited / had squandered away, inherited / had squandered away, had inherited)
7. When I reached there I found that the tiger \_\_\_\_\_. (disappeared / had disappeared / either could be used here)
8. He lost his temper before I \_\_\_\_\_ a word. (said / had said / either could be used here)
9. My friend \_\_\_\_\_ in Mumbai since 1990. (is working / has been working / was working)

10. He \_\_\_\_\_ for you since 8 o'clock. (is waiting / has been waiting / was waiting)
11. I \_\_\_\_\_ to school by bus. (go / am going)
12. I \_\_\_\_\_ him to go. (said / told)

**Q2. Complete the following sentences using an appropriate tense form-**

1. I \_\_\_\_\_ here since morning. (am waiting / have been waiting / had been waiting)
2. It \_\_\_\_\_ raining since yesterday. (hasn't stopped / didn't stop / hadn't)
3. I \_\_\_\_\_ interested in metaphysics. (am always / have always been / had always been)
4. They \_\_\_\_\_ in this street for twenty years. (have lived / have been living / either could be used here)
5. I \_\_\_\_\_ to a foreign country. (am never gone / have never been / was never gone)
6. Where \_\_\_\_\_ the sun rise? (does / do / had)
7. I \_\_\_\_\_ Susie Monday. (see / am seeing / either could be used here)
8. We \_\_\_\_\_ the money on the 15<sup>th</sup>. (are needing / will need / either could be used)
9. There is the doorbell. "I \_\_\_\_\_. (am going / will go / either could be used here)
10. She \_\_\_\_\_ half of her time travelling. (spends / is spending / either could be used here)

**Q3. . Read the following paragraph aloud. Remember to speak loudly, clearly and confidently. It will help if you first read the paragraph to yourself, and then begin to read it aloud after that. This will benefit you in your verbal communication skills. Enjoy your Read Aloud!**

**Levi's Blue Jeans**



## Vocabulary

- ❖ **Emigrate-** (v) to move permanently from one's country to another.
- ❖ **dry goods-** (n) clothing, fabric, and other items to sell
- ❖ **Miner-** (n) a person who searches for gold, diamonds, etc.
- ❖ **durable-** (adj) last a long time
- ❖ **Fabric-** (n) material for clothing, curtains, etc.
- ❖ **tailor-** (n) a person who sews clothing
- ❖ **Rivet-** (n) (v) a metal piece that holds 2 things together. (You can see the metal on Levi's jeans)
- ❖ **patent-** (n) (v) an inventor's right to be the only one making or selling a product
- ❖ **think it over-**(v) think about it, decide

**Do you enjoy wearing Levi's blue jeans? Blue jeans have become popular all over the world, but do you know how they got started? Read on to find out...**

Levi Strauss was born in Germany in the mid 1800's and emigrated to the United States as a young man. He lived in New York City and learned the dry goods business for several years. In 1853 he took his knowledge and his dreams to San Francisco (California., USA.) His dream to succeed came true over the next 20 years as he became a very successful businessman.

Many of Levi Strauss' customers were cowboys and miners. They needed clothing that was strong and durable. Strauss found a special fabric from France that was comfortable and lasted a long time. It was called 'serge de Nimes,' which was later shortened to the word denim.

Another man named Jacob Davis bought large amounts of the denim fabric from Levi Strauss. He was a tailor who made pants for hard-working men. One of his customers was continually tearing the pockets off his pants. So Jacob Davis decided to put rivets on certain parts of the pants to make them stronger. The customer loved the new pants so much that he told all his friends, and soon Jacob Davis was busy making lots of pants with rivets.

Jacob Davis soon realized that using rivets was a great business idea, and he didn't want anybody to steal that idea. He decided that he would need to get a patent. But being a poor tailor, he didn't have enough money to pay for the patent. After thinking it over, he went to the businessman Levi Strauss and told him his idea. He said, "If you agree to pay for the patent, we will share the profits from the riveted pants." Levi Strauss did agree, and the new riveted pant business was called Levi Strauss and Company. Today Levi's jeans are more popular than ever, and Levi's name continues to live on.

## **Answer Key-**

### **Q1. Fill in the blanks with correct options-**

1. has been ill.
2. had seen
3. finished / had finished
4. left / had left
5. began / had begun
6. squandered away, had inherited
7. had disappeared
8. had said
9. has been working
10. has been waiting
11. go
12. told

### **Q2. Complete the following sentences using an appropriate tense form-**

1. have been waiting
2. hasn't stopped
3. have always been
4. have lived / have been living
5. have never been
6. does
7. am seeing
8. will need
9. will go
10. spends

\*\*\*\*\*

Amazon today cancelled the subscription of books and audio stories for children and students of all ages as long as schools are closed. Kids everywhere can instantly stream an incredible collection of stories, including titles across six different languages. All stories are free to stream on your desktop, laptop, phone or tablet using the following-

<https://stories.audible.com/start-listen>

You are advised to visit the site as well as listen to the audio stories. This will continue to enrich your vocabulary, your Read Aloud skills, and diction, pronunciation and communication skills.

All the Best.



## FOUNDATION WORKSHEET

**Class: 7**

**Week: 3**

**Subject: Maths**

**Date: 15/04/2020**

**Name: \_\_\_\_\_**

**Code: Maths-012/15apr/20-21**

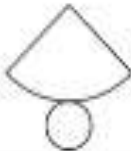

1. Dear Students during this time while you are at home, your school is ensuring that your academic work continues and your foundation grows stronger every day.
2. Given is a worksheet which you must complete today.
3. The Answer Key is also given at the end of the exercise. You may ask your parents to check your Exercise only after you have completed the worksheet.
4. You can take a printout of the worksheet if possible or you can solve it in any exercise book.
5. You must make one note book for all the subjects (where you can stick worksheet or you can write).
6. In case of any doubt you can ask your teachers once school will reopen.



## Maths Worksheet 012

NAME: \_\_\_\_\_

CLASS: 7 SECTION: \_\_\_\_\_ (III - Week) DATE: 15/04/2020

1)	Find $\frac{3}{4}$ of \$32.	
2)	$1 - 0.92$	
3)	Find the value of $(x - 6)/3$ if $x = 21$ .	
4)	$10 \times 4 = 26 + \underline{\hspace{1cm}}$	
5)	Round 6.283 to 1dp	
6)	What is the missing number? 7.3 <u>    </u> 8.1    8.5    8.9	
7)	What 3d shape is this the net for? 	
8)	How many faces does a triangular prism have?	
9)	In a group of children, $\frac{3}{5}$ like to play tennis. If there are 25 children, how many do not like tennis?	
10)	Timmy and Tommy are two boys whose ages add up to 23. Timmy is 5 years older than Tommy. How old are they?	
11)	How many inches on the ruler? 	
12)	What is the <b>mean</b> of 13, 7, 8 and 4?	
13)	Which is the <b>smallest</b> ? 0.37    0.194    0.6    0.473    0.29	
14)	$3\frac{2}{5} + 2\frac{3}{5}$	
15)	How much is half of a fourth?	
16)	A rectangular swimming pool measures $5\frac{1}{2}$ meters by $3\frac{1}{2}$ meters. What is the <b>perimeter</b> ?	
17)	What do angles around a point add up to?	
18)	The <b>ratio</b> of lions to tigers in a zoo is 1:3. If there are 4 lions, how many tigers will there be?	

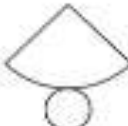



## Maths Worksheet 012

NAME: \_\_\_\_\_

CLASS: 7 SECTION: \_\_\_\_\_ (III - Week) DATE: 15/04/2020

### Answer

1)	Find $\frac{3}{4}$ of \$32.	\$24
2)	$1 - 0.92$	0.08
3)	Find the value of $(x - 6)/3$ if $x = 21$ .	5
4)	$10 \times 4 = 26 + \underline{\hspace{1cm}}$	14
5)	Round 6.283 to 1dp	6.3
6)	What is the missing number? 7.3 <u>    </u> 8.1    8.5    8.9	7.7
7)	What 3d shape is this the net for? 	cone
8)	How many faces does a triangular prism have?	5
9)	In a group of children, $\frac{3}{5}$ like to play tennis. If there are 25 children, how many do not like tennis?	10
10)	Timmy and Tommy are two boys whose ages add up to 23. Timmy is 5 years older than Tommy. How old are they?	Tommy 9 Timmy 14
11)	How many inches on the ruler? 	$3 \frac{3}{4}$ in
12)	What is the <b>mean</b> of 13, 7, 8 and 4?	8
13)	Which is the <b>smallest</b> ? 0.37    0.194    0.6    0.473    0.29	0.194
14)	$3 \frac{2}{5} + 2 \frac{1}{5}$	$5 \frac{3}{5}$
15)	How much is half of a fourth?	$\frac{1}{8}$
16)	A rectangular swimming pool measures $5 \frac{1}{2}$ meters by $3 \frac{1}{2}$ meters. What is the <b>perimeter</b> ?	18m
17)	What do angles around a point add up to?	$360^\circ$
18)	The <b>ratio</b> of lions to tigers in a zoo is 1:3. If there are 4 lions, how many tigers will there be?	12



**FOUNDATION WORKSHEET****Class: 7****Week: 3****Subject: Science****Date: 15/04/2020****Name: \_\_\_\_\_****Code: Sci-012/15apr/20-21**

1. Dear students during this time while you are at home, your school is ensuring that your academic work continues and your foundation grows stronger every day.
  2. Given is a worksheet which you must complete today.
  3. The Answer Key is also given at the end of the exercise. You may ask your parents to check your exercise only after you have completed the worksheet.
  4. You can take a printout of the worksheet if possible or you can solve it in any exercise book.
  5. You must make one notebook for all the subjects (where you can stick worksheet or you can write).
  6. In case of any doubt you can ask your teachers once school will reopen.
- 

A] Match the following:

**Column I**

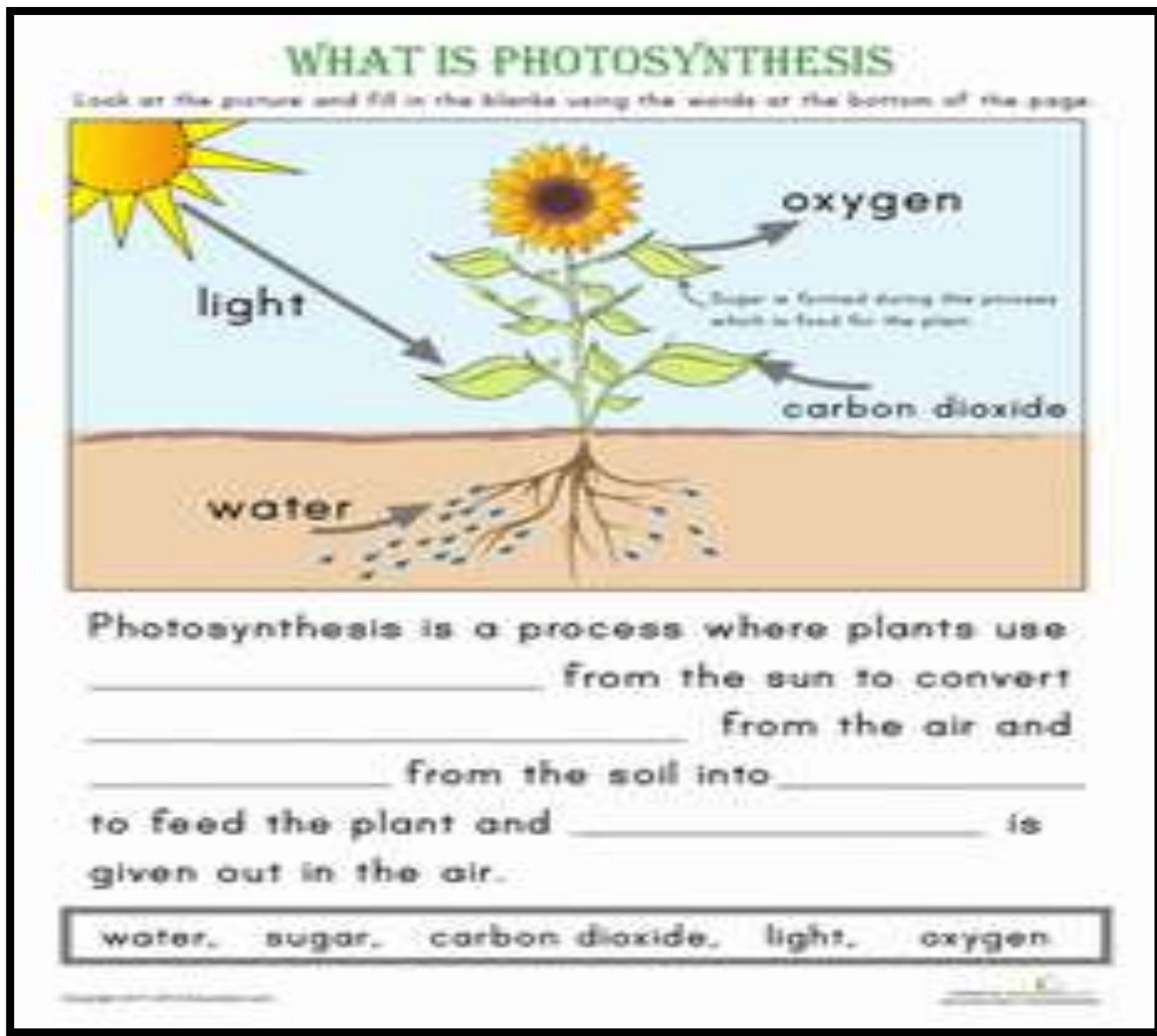
1. Stomach
2. Salivary gland
3. Small intestine
4. Large intestine
5. Rectum
6. Liver

**Column II**

- i) Acid release
- ii) Storage of undigested food
- iii) Bile secretion
- iv) Complete digestion
- v) Absorption of water
- vi) Saliva secretion



B] Observe the process of photosynthesis and fill in the blanks given below.



C] Name the following.

1. Organ that tastes food. \_\_\_\_\_
2. Last part of alimentary canal. \_\_\_\_\_
3. An acid that kills bacteria in stomach. \_\_\_\_\_
4. Feeds with the help of pseudopodia. \_\_\_\_\_
5. Watery secretion in mouth. \_\_\_\_\_
6. The first chamber of ruminant's stomach. \_\_\_\_\_
7. Removal of undigested food from the body. \_\_\_\_\_
8. A kind of carbohydrate present in grass. \_\_\_\_\_

D] Draw a well labelled diagram of amoeba.



## Answer Key

A]

1. Acid release
2. Saliva secretion
3. Complete Digestion
4. Absorption of water
5. Storage of undigested food
6. Bile secretion

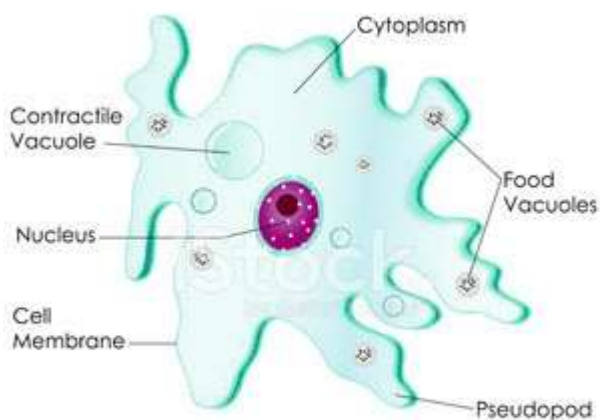
B]

1. Light
2. Carbon dioxide
3. Water
4. Sugar
5. Oxygen

C]

1. Tongue
2. Anus
3. Hydrochloric Acid
4. Amoeba
5. Saliva
6. Rumen
7. Egestion
8. Cellulose

D]



**FOUNDATION WORKSHEET**

Class: 7

Subject: Hindi

Name: \_\_\_\_\_

Week 3

Date: 15-04-2020

Code: HIN-012/15Apr/20-21

1. Dear students during this time while you are at home your school is insuring that your academic work continues and your foundation grows stronger every day.
2. Given is a worksheet which you must complete today.
3. The answer key is given at the end of the exercise. You may ask your parents to check your exercise only after you have completed the worksheet.
4. You can take a printout of the worksheet if possible you can solve it any exercise book.
5. You must make 1 notebook of all the subjects (where you can stick worksheets or you can write).
6. In case of any doubt you can ask your teacher when school will reopen.

प्रश्न १) मुहावरे का सही अर्थ से मिलान कीजिए ।

१) एक और एक ग्यारह

१) आवश्यकता से बहुत कम होना।

२) उड़न छू हो ना

२) विरोध प्रकट करना।

३) ऊंट के मुंह में जीरा होना

३) एकता में बल।

४) आवाज उठाना

४) गायब हो जाना।

५) आग बबूला होना

५) विश्वासघाती मित्र।

६) आस्तीन का सांप

६) स्वाबलंबी होना।

७) आम के आम गुठलियों के दाम

७) बहुत गुस्सा होना।

८) अपने पैरों पर खड़ा होना

८) दोहरा लाभ होना।

९) उल्टा चोर कोतवाल को डांटे

९) सबको बराबर देखना।

१०) एक आंख से देखना

१०) दोषी होने पर भी दूसरों को दोषी ठहराना।

प्रश्न २) पर्यायवाची शब्द लिखिए

१) पृथ्वी = \_\_\_\_\_

२) स्कूल = \_\_\_\_\_

३) विपद = \_\_\_\_\_

४) स्त्री = \_\_\_\_\_

५) उपवन = \_\_\_\_\_

६) मित्र = \_\_\_\_\_

७) हाथ = \_\_\_\_\_

८) सूर्य = \_\_\_\_\_

९) अंबर = \_\_\_\_\_

१०) अरण्य = \_\_\_\_\_

उत्तर सूची:-

प्रश्न १)१-३, २-४, ३-१, ४-२, ५-७, ८-६, ९-१०, १०-९

प्रश्न २) १)वसुंधरा ,धरा २) पाठशाला ,विद्यालय३) विपत्ति ,आपदा ४)नारी, महिला  
५)बगीचा ,वाटिका६) सखा,दोस्त ७)हस्त, कर ८)रवि, दिनकर ९)आकाश, नभ  
१०)वन, कानन