



# ROYAL OAKS WORLD SCHOOL

## FOUNDATION WORKSHEET

**Class: 6**

**Week: 3**

**Subject: English**

**Date: 16/04/2020**

**Name: \_\_\_\_\_**

**Code: ENG-013/16apr/20-21**

1. Dear students during this time while you are at home, your school is ensuring that your academic work continues and your foundation grows stronger every day.
2. Given is a worksheet which you must complete today.
3. The Answer Key is also given at the end of the exercise. You may ask your parents to check your exercise only after you have completed the worksheet.
4. You can take a printout of the worksheet if possible or you can solve it in any exercise book.
5. You must make one notebook for all the subjects (where you can stick worksheet or you can write).
6. In case of any doubt you can ask your teachers once school will reopen.

Q.1. Rewrite the following sentences in the tense indicated,

1) He was loved by all his subjects. (Simple Future)

Ans. \_\_\_\_\_

2) They were all praise for him. (Present Perfect)

Ans. \_\_\_\_\_

3) But your own books belong to you. (Simple Future)

Ans. \_\_\_\_\_

4) In these books you see these men at their best. (Present Perfect)

Ans. \_\_\_\_\_

5) They did their ultimate best to entertain you. (Past Perfect)

Ans. \_\_\_\_\_

6) But I'm perfectly certain I put it back.(Simple Past)

Ans. \_\_\_\_\_

7) She went to her room. (Present Progressive)

Ans. \_\_\_\_\_

8) He was confounded and puzzled. (Past Perfect)

Ans. \_\_\_\_\_

9) The child had evidently been crying. (Past Perfect)

Ans. \_\_\_\_\_

10) He agreed readily. (Simple Future)

Ans. \_\_\_\_\_

Q.2. Identify the verb in the following sentences and state the tense in which each verb is.

- 1) Music has a strong part to play in films.
- 2) Think about it.
- 3) The story embodies a plea for the rights of animals to stay wild and free.
- 4) I have been assisting some young friends who are budding herpetologist.
- 5) Most snakes will just slither away harmlessly.
- 6) The famous Sanchi Stupa also carries images of the peacock.
- 7) She has also conquered the Seven Summits of the world.
- 8) The rains have heralded the arrivals of some seasonal visitors.
- 9) Water drips from a leaking drain pipe.
- 10) We did our best but made some mistakes at crucial time.

### Answer key

**Q.1. Rewrite the following sentences in the tense indicated:,**

- 1) He will be loved by all his subjects.**
- 2) They have been all praise for him.**
- 3) But your own books will belong to you.**
- 4) In these books you have seen these men at their best.**
- 5) They have done their ultimate best to entertain you.**
- 6) But I was perfectly certain I put it back.**
- 7) She is going to her room.**
- 8) He had been confounded and puzzled.**
- 9) The child had evidently cried.**
- 10) He will agree readily.**

**Q.2. Identify the verb in the following sentences and state the tense in which each verb is.**

- 1) has - Simple Present Tense**
- 2) Think - Simple Present Tense**
- 3) embodies - Simple Present Tense**
- 4) have been assisting - Present Perfect Progressive Tense**
- 5) will slither - Simple Future Tense**
- 6) carries - Simple Present Tense**
- 7) has conquered - Present Perfect Tense**
- 8) have heralded - Present Perfect Tense**

9) drips - Simple Present Tense

10) did, made - Simple Past Tense.

Greetings from Royal Oaks World School

Amazon today cancelled the subscription of books and audio stories for children and students of all ages as long as schools are closed, kids everywhere can instantly stream an incredible collection of stories, including titles across six different languages.

All stories are free to stream on your desktop, laptop, phone or table using the following:

<https://stories.audible.com/start-listen>

**FOUNDATION WORKSHEET****Class: 6****Week: 3****Subject: Maths****Date: 16/04/2020****Name: \_\_\_\_\_****Code: Maths-013/16apr/20-21**


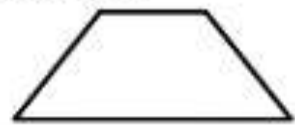
1. Dear Students during this time while you are at home, your school is ensuring that your academic work continues and your foundation grows stronger every day.
2. Given is a worksheet which you must complete today.
3. The Answer Key is also given at the end of the exercise. You may ask your parents to check your Exercise only after you have completed the worksheet.
4. You can take a printout of the worksheet if possible or you can solve it in any exercise book.
5. You must make one note book for all the subjects (where you can stick worksheet or you can write).
6. In case of any doubt you can ask your teachers once school will reopen.



## Maths Worksheet 013

NAME: \_\_\_\_\_

CLASS: 6 SECTION: \_\_\_\_\_ (III - Week) DATE: 16/04/2020

1)	$0.35 + 0.6 + \underline{\hspace{1cm}} = 1$	
2)	$\frac{3}{4}$ of 24	
3)	Which of these numbers is not a multiple of 4? 36 62 28 52 72 88	
4)	If $x = 5$ , what is the value of $(2x + 8)/3$	
5)	Add up all the odd numbers between 20 and 26.	
6)	Solve $2x = 12$	
7)	The perimeter of a rectangle is 12cm. The area is $5\text{cm}^2$ . What is the length of the sides?	
8)	Write down all the prime numbers between 30 and 40.	
9)	What is the missing angle? 	
10)	A scale model of a motorbike is made with a ratio of 1:40. The length on the scale model is 6cm. How long is the actual motorbike?	
11)	$1625 \div 100$	
12)	Sally sells 30 raffle tickets and makes \$18. How much did she sell each ticket for?	
13)	$52.76 = 52 + 0.7 + \underline{\hspace{1cm}}$	
14)	Convert $1\frac{7}{6}$ to a mixed number.	
15)	Write 'a' on each acute angle. How many are there? 	
16)	The time is 7:25pm. What is the 24-hour clock time?	
17)	$\frac{1}{5} + \frac{1}{4}$	
18)	A husky runs at 28 miles per hour for 30 minutes. How far has it run?	





## Maths Worksheet 013

NAME: \_\_\_\_\_

CLASS: 6 SECTION: \_\_\_\_\_ (III - Week) DATE: 16/04/2020

### Answer

1)	$0.35 + 0.6 + \underline{\hspace{1cm}} = 1$	<b>0.05</b>
2)	$\frac{3}{4}$ of 24	<b>18</b>
3)	Which of these numbers is not a multiple of 4? 36 62 28 52 72 88	<b>62</b>
4)	If $x = 5$ , what is the value of $(2x + 8)/3$	<b>6</b>
5)	Add up all the odd numbers between 20 and 26.	<b>21+23+25=69</b>
6)	Solve $2x = 12$	<b><math>x = 6</math></b>
7)	The perimeter of a rectangle is 12 feet. The area is 5 square feet. What is the length of the sides?	<b>1 ft and 5 ft</b>
8)	Write down all the prime numbers between 30 and 40.	<b>31, 37</b>
9)	What is the missing angle? 	<b>145°</b>
10)	A scale model of a motorbike is made with a ratio of 1:40. The length on the scale model is 6cm. How long is the actual motorbike?	<b>2.4m or 240 cm</b>
11)	$1625 \div 100$	<b>16.25</b>
12)	Sally sells 30 raffle tickets and makes \$18. How much did she sell each ticket for?	<b>60¢</b>
13)	$52.76 = 52 + 0.7 + \underline{\hspace{1cm}}$	<b>0.06</b>
14)	Convert $1\frac{5}{6}$ to a mixed number.	<b><math>2\frac{5}{6}</math></b>
15)	Write 'a' on each acute angle. How many are there? 	<b>2 acute angles</b>
16)	The time is 7:25pm. What is the 24-hour clock time?	<b>19:25</b>
17)	$\frac{1}{5} + \frac{1}{4}$	<b><math>\frac{9}{20}</math></b>
18)	A husky runs at 28 miles per hour for 30 minutes. How far has it run?	<b>14 miles</b>



## **FOUNDATION WORKSHEET**

**Class: 6**

**Subject: Science**

**Name: \_\_\_\_\_**

**Week: 3**

**Date: 16/04/2020**

**Code: SCI-013/16apr/20-21**

1. Dear students during this time while you are at home, your school is ensuring that your academic work continues and your foundation grows stronger every day.
2. Given is a worksheet which you must complete today.
3. The Answer Key is also given at the end of the exercise. You may ask your parents to check your exercise only after you have completed the worksheet.
4. You can take a printout of the worksheet if possible or you can solve it in any exercise book.
5. You must make one notebook for all the subjects (where you can stick worksheet or you can write).
6. In case of any doubt you can ask your teachers once school will reopen.

### **SELECT THE CORRECT ANSWER FROM THE GIVEN OPTIONS**

1. Water is a/an
  - a. Element
  - b. Compound
  - c. Mixtured.
  - d. Solution
2. The process of changing water vapour into water is called
  - a. Evaporation
  - b. Boiling
  - c. Condensationd.
  - d. Sedimentation
3. Which one is not a natural source of water
  - a. Pond
  - b. River
  - c. Laked.
  - d. Canal
4. Loss of water by plants is called
  - a. Transpiration
  - b. Condensation
  - c. Transportationd.
  - d. Evaporation

5. Match the following:

Column A	Column B
a. Flood	i. loss water by plant.
b. Drought	ii. changing of water into water vapour
c. Condensation	iii. excessive rain
d. Evaporation	iv. low or no rain
e. Transpiration	v. changing of water vapour into water

6. Fill in the blanks with suitable words.

- Water is\_\_\_\_\_for life.
- Most of water available to us is as\_\_\_\_\_water.
- Loss of water in form of water vapour through plant is called\_\_\_\_\_.
- Wet clothes dry up in Sun due to\_\_\_\_\_
- Water is a\_\_\_\_\_of Hydrogen and Oxygen.

7. What is water cycle?

---

---

8. Draw a well labelled diagram of water cycle.

9. Write three uses of water?

---

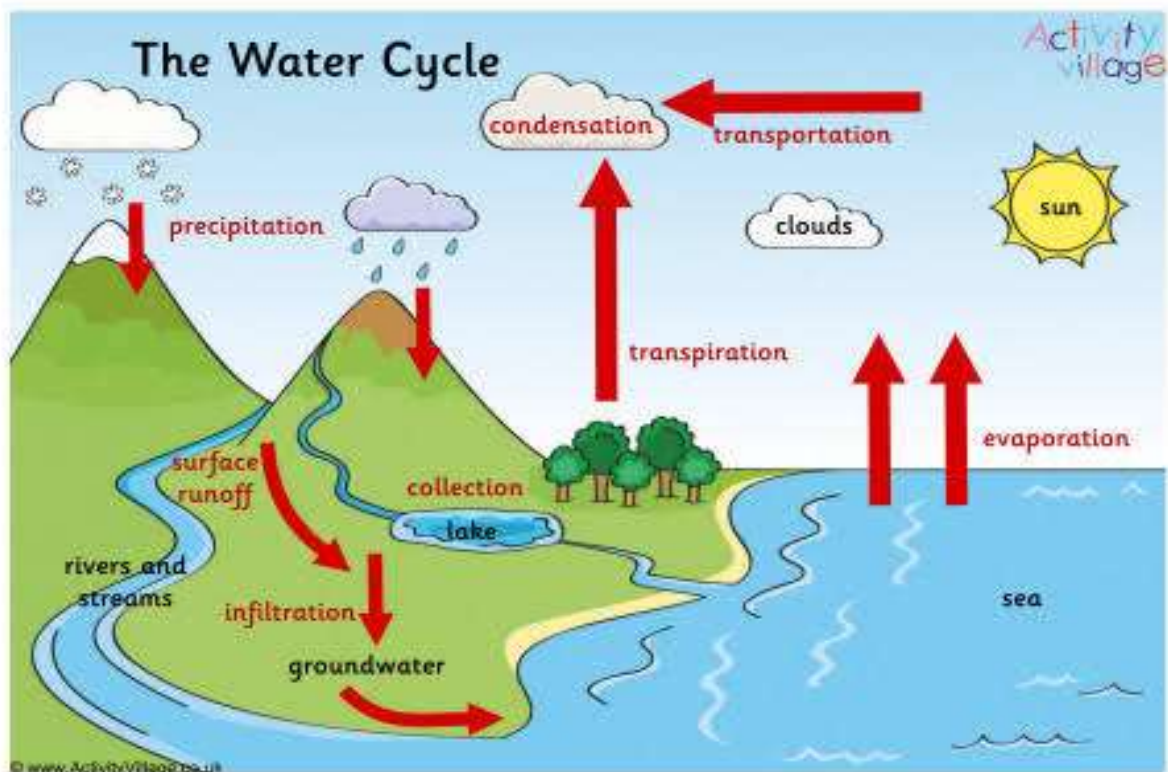
---

---

## Answer key

1. b
2. c
3. b
4. a
5. (a) – (iii), (b) – (iv), (c) – (v), (d) – (ii), (e) – (i).
6.
  - a. essential
  - b. ground
  - c. transpiration
  - d. evaporation
  - e. compound
7. The cyclic flow of water in different state in form of water vapour, water and clouds due to evaporation, condensation and raining is called water cycle. It is essential to maintain constant supply of water on earth and it also helps in regulating earth's temperature.

8.



9. Uses of water:
  - a. Used for drinking, washing and bathing.
  - b. In factories water is used for cleaning and as a coolant for machines.
  - c. Used as solvent.

**FOUNDATION WORKSHEET**

Class: 6

Subject: Hindi

Name: \_\_\_\_\_

Week 3

Date: 16-04-2020

Code: HIN-013/16Apr/20-21

1. Dear students during this time while you are at home your school is insuring that your academic work continues and your foundation grows stronger every day.
2. Given is a worksheet which you must complete today.
3. The answer key is given at the end of the exercise. You may ask your parents to check your exercise only after you have completed the worksheet.
4. You can take a printout of the worksheet if possible you can solve it any exercise book.
5. You must make 1 notebook of all the subjects (where you can stick worksheets or you can write).
6. In case of any doubt you can ask your teacher when school will reopen.

"जब दो या दो से अधिक शब्दों से मिलकर जो नया और छोटा शब्द बनता है उस शब्द को **समास** कहते हैं।"

प्रश्न १) रिक्त स्थान की पूर्ति कीजिए।

[संक्षिप्ततीकरण, उत्तर पद, समास, दो, समस्तपद, पूर्व पद]

१) समास का तात्पर्य है \_\_\_\_\_

२) समास में \_\_\_\_\_ पद होते हैं ।

३) समास में पहले पद को \_\_\_\_\_ कहते हैं।

४) समास में दूसरे पद को \_\_\_\_\_ कहते हैं ।

५) \_\_\_\_\_ वह क्रिया है जिसके द्वारा हिंदी में कम से कम शब्दों में अधिक से अधिक अर्थ प्रकट किया जाता है।

६) पूर्व व उत्तर पद ये दोनों से जो नया शब्द बनता है उसे \_\_\_\_\_ कहते हैं।

प्रश्न २) समस्त पद से पूर्व व उत्तर पद अलग कीजिए।

समस्त पद = पूर्व पद उत्तर पद

**रसोईघर** = रसोई घर

राजा का पुत्र = \_\_\_\_\_

यथा शक्ति। = \_\_\_\_\_

वन को गमन = \_\_\_\_\_

शोक से ग्रस्त = \_\_\_\_\_

माता और पिता = \_\_\_\_\_

प्रश्न ३) नीचे दिए गए प्रत्यय का सही शब्द से मिलान कीजिए।

**प्रत्यय शब्द के बाद लगाते हैं।**

अनेकता = अनेक + ता

१) पालनहार = \_\_\_\_\_ + \_\_\_\_\_

२) समझदार = \_\_\_\_\_ + \_\_\_\_\_

३) बचपन = \_\_\_\_\_ + \_\_\_\_\_

४) बहता = \_\_\_\_\_ + \_\_\_\_\_

५) सब्जीवाला = \_\_\_\_\_ + \_\_\_\_\_

६) बड़ाई = \_\_\_\_\_ + \_\_\_\_\_

उत्तर सूची:-

प्रश्न १) १)संक्षिप्ततीकरण २) दो ३)पूर्व ४)उत्तर ५)समास ६)समस्त पद

प्रश्न २) १) राज+पुत्र २)यथा+शक्ति ३)वन +गमन ४)शोक +ग्रस्त ५)माता +पिता

प्रश्न ३) १)पालन+हार २)समझ+दार ३)बच+पन ४)बहता=बह+ता

५) सब्जीवाला=सब्जी +वाला ६) बड़ाई=बड़ा+आई