



# ROYAL OAKS WORLD SCHOOL

## FOUNDATION WORKSHEET

**Class: 5**

**Week: 3**

**Subject: English**

**Date: 17/04/2020**

**Name: \_\_\_\_\_**

**Code: ENG-014/17apr/20-21**

1. Dear students during this time while you are at home, your school is ensuring that your academic work continues and your foundation grows stronger every day.
2. Given is a worksheet which you must complete today.
3. The Answer Key is also given at the end of the exercise. You may ask your parents to check your exercise only after you have completed the worksheet.
4. You can take a printout of the worksheet if possible or you can solve it in any exercise book.
5. You must make one notebook for all the subjects (where you can stick worksheet or you can write).
6. In case of any doubt you can ask your teachers once school will reopen.

**Q. Read the following passage carefully and answer the questions given below:**

Once, a crow and his wife had a nest in a banyan tree. One day a black snake came there and started living in a hole under the tree. To live with a snake as a neighbour was dangerous. Soon, the mother crow laid eggs. Some time later the baby crows hatched. Both the father and the mother crow flew in search of food to feed their hungry children. In their absence, the snake killed the young birds and ate them up. When the couple returned,

they found the baby crows missing. It was clear that the snake had eaten them. One day the father crow lifted the necklace of a lady of the royal household and threw it into the snake's hole. The servants of the royal household followed the crow. They killed the snake and got the necklace out of the hole. The crows were free of their dangerous neighbour.

1) Where did the crow and his wife live?

Ans. \_\_\_\_\_

2) Who lived in a hole under the tree?

Ans. \_\_\_\_\_

3) Why did the mother and the father crow fly off leaving their babies behind?

Ans. \_\_\_\_\_

\_\_\_\_\_

4) What happened in their absence?

Ans. \_\_\_\_\_

5) Why did the servants kill the snake?

Ans. \_\_\_\_\_

\_\_\_\_\_

### Answer key

Ans. 1) The crow and his wife lived in a nest in a banyan tree.

Ans. 2) A snake lived in a hole under the tree.

Ans. 3) The mother and the father crow flew off leaving their babies behind in search of food.

Ans. 4) In their absence, the snake killed the young birds and ate them up.

Ans. 5) The servants killed the snake because they found the royal necklace in it's hole.

### Greetings from Royal Oaks World School

Amazon today cancelled the subscription of books and audio stories for children and students of all ages as long as schools are closed, kids everywhere can instantly stream an incredible collection of stories, including titles across six different languages.

All stories are free to stream on your desktop, laptop, phone or table using the following:

<https://stories.audible.com/start-listen>

**FOUNDATION WORKSHEET****Class: 5****Week: 3****Subject: Maths****Date: 17/04/2020****Name: \_\_\_\_\_****Code: Maths-014/17apr/20-21**

1. Dear Students during this time while you are at home, your school is ensuring that your academic work continues and your foundation grows stronger every day.
2. Given is a worksheet which you must complete today.
3. The Answer Key is also given at the end of the exercise. You may ask your parents to check your Exercise only after you have completed the worksheet.
4. You can take a printout of the worksheet if possible or you can solve it in any exercise book.
5. You must make one note book for all the subjects (where you can stick worksheet or you can write).
6. In case of any doubt you can ask your teachers once school will reopen.



## Maths Worksheet 014

NAME: \_\_\_\_\_

CLASS: 5 SECTION: \_\_\_\_\_ (III - Week) DATE: 17/04/2020

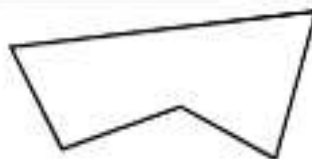
1)  $42 \div 6$

2) Circle 4 coins which make 65¢?



3)  $10 \times 4 = 33 + \underline{\quad}$

4) What is the name of this shape?



5)  $20 + 300 + 7 + 1000$

6)  $8 \times 6$

7) Round 5638 to the nearest 100.

8) What is  $\frac{3}{7} + \frac{2}{7}$

9)  $0.3 + \underline{\quad} = 0.9$

10) four thousand subtract 4

11) Joe is 6 years older than Molly. Molly is half the age of Luke. If Luke is 26 years old, how old is Joe?

12) How many pints in 2 gallons?

13) A banana costs 24¢. How much does a bunch of 3 cost?

14) Measure this line in cm. \_\_\_\_\_

15) I have \$1. I spend 68¢. How much do I have left?

16) An egg weighs about..... 7g 70g 700g 7000g?


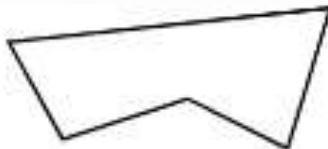


## Maths Worksheet 014

NAME: \_\_\_\_\_

CLASS: 5 SECTION: \_\_\_\_\_ (III - Week) DATE: 17/04/2020

### Answer

1)	$42 \div 6$	7
2)	Circle 4 coins which make 65¢? 	
3)	$10 \times 4 = 33 + \underline{\hspace{1cm}}$	7
4)	What is the name of this shape? 	(irregular) pentagon
5)	$20 + 300 + 7 + 1000$	1327
6)	$8 \times 6$	48
7)	Round 5638 to the nearest 100.	5600
8)	What is $\frac{3}{7} + \frac{2}{7}$	$\frac{5}{7}$
9)	$0.3 + \underline{\hspace{1cm}} = 0.9$	0.6
10)	four thousand subtract 4	3996
11)	Joe is 6 years older than Molly. Molly is half the age of Luke. If Luke is 26 years old, how old is Joe?	19
12)	How many pints in 2 gallons?	16
13)	A banana costs 24¢. How much does a bunch of 3 cost?	72¢
14)	Measure this line in cm. _____	approx. 8.7cm
15)	I have \$1. I spend 68¢. How much do I have left?	32¢
16)	An egg weighs about..... 7g 70g 700g 7000g?	70g

## **FOUNDATION WORKSHEET**

**Class: 5**

**Subject: Science**

**Name: \_\_\_\_\_**

**Week: 3**

**Date: 17/04/2020**

**Code: SCI-014/17apr/20-21**

1. Dear students during this time while you are at home, your school is ensuring that your academic work continues and your foundation grows stronger every day.
2. Given is a worksheet which you must complete today.
3. The Answer Key is also given at the end of the exercise. You may ask your parents to check your exercise only after you have completed the worksheet.
4. You can take a printout of the worksheet if possible or you can solve it in any exercise book.
5. You must make one notebook for all the subjects (where you can stick worksheet or you can write).
6. In case of any doubt you can ask your teachers once school will reopen.

### **SELECT THE CORRECT ANSWER FROM THE GIVEN OPTIONS**

1. Water is a/an
  - a. Element
  - b. Compound
  - c. Mixtured.
  - d. Solution
2. The process of changing water vapour into water is called
  - a. Evaporation
  - b. Boiling
  - c. Condensationd.
  - d. Sedimentation
3. Which one is not a natural source of water
  - a. Pond
  - b. River
  - c. Laked.
  - d. Canal
4. Loss of water by plants is called
  - a. Transpiration
  - b. Condensation
  - c. Transportationd.
  - d. Evaporation

5. Match the following:

Column A	Column B
a. Flood	i. loss water by plant.
b. Drought	ii. changing of water into water vapour
c. Condensation	iii. excessive rain
d. Evaporation	iv. low or no rain
e. Transpiration	v. changing of water vapour into water

6. Fill in the blanks with suitable words.

(Compound, evaporation, transpiration, ground, essential)

- Water is\_\_\_\_\_for life.
- Most of water available to us is as\_\_\_\_\_water.
- Loss of water in form of water vapour through plant is called\_\_\_\_\_.
- Wet clothes dry up in Sun due to\_\_\_\_\_
- Water is a\_\_\_\_\_of Hydrogen and Oxygen.

7. What is water cycle?

---

---

---

8. Draw a well labelled diagram of water cycle.

9. Write three uses of water?

---

---

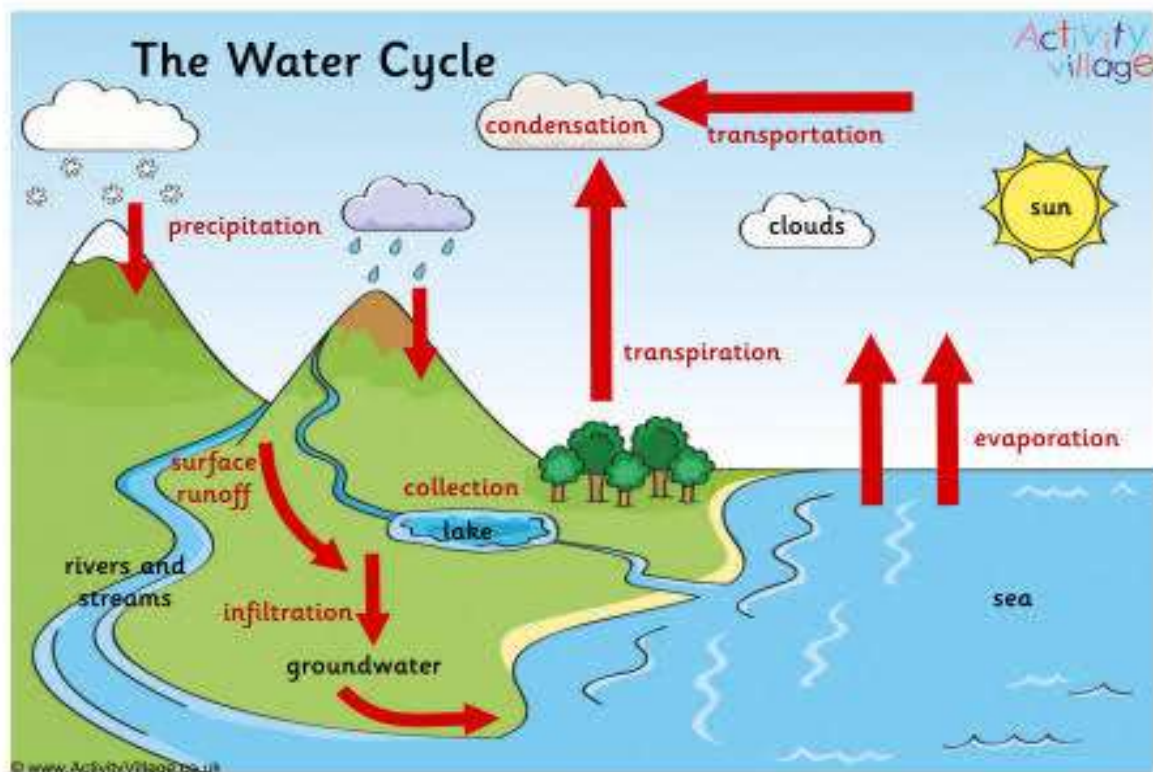
---

---



## Answer key

1. b
2. c
3. b
4. a
5. (a) – (iii), (b) – (iv), (c) – (v), (d) – (ii), (e) – (i).
6.
  - a. essential
  - b. ground
  - c. transpiration
  - d. evaporation
  - e. compound
7. The cyclic flow of water in different state in form of water vapour, water and clouds due to evaporation, condensation and raining is called water cycle.
- 8.



9. Uses of water:
  - a. Used for drinking, washing and bathing.
  - b. In factories water is used for cleaning and as a coolant for machines.
  - c. Used as solvent.



# ROYAL OAKS WORLD SCHOOL

## **FOUNDATION WORKSHEET**

**Class: 5**


**Week: 3**

**Subject: HINDI**

**Date: 17/04/2020**

**Name: \_\_\_\_\_ Code: HIN-014/17apr/20-21**

1. Dear students during this time while you are at home, your school is ensuring that your academic work Continues and your foundation grows stronger every day.
2. Given is a worksheet which you must complete today.
3. The Answer Key is also given at the end of the exercise. You may ask your parents to check your Exercise only after you have completed the worksheet.
4. You can take a printout of the worksheet if possible or you can solve it in any exercise book.
5. You must make one note book for all the subjects (where you can stick worksheet or you can write).
6. In case of any doubt you can ask your teachers once school will reopen.



**प्र.1) निम्नलिखित अनुच्छेद को ध्यानपूर्वक पढ़कर पूछे गए प्रश्नों के उत्तर लिखिए**

एक कौए ने मोर के पंख लगा लिए और अपने को मोर समझकर मोरों की एक टोली में जा घुसा। उसे देखकर मोरों की टोली ने उसे फौरन पहचान लिया। फिर क्या। दूसरे ही पल सारे मोर उस पर झपट पड़े। चोंच मारकर उसे अपनी टोली से दूर भगा दिया। रोता हुआ कौवा वापस अपने घर लौट आया। उसके अपने दोस्त भी उसकी इस हरकत से नाराज हो गए। वे भी उस पर टूट पड़े। सारे कौआ ने मिलकर उसके पंख नोच डाले।

1. मोर पंख किसने लगाए ?

उत्तर: \_\_\_\_\_

2. कौवा कहाँ जा घुसा ?

उत्तर: \_\_\_\_\_

3. मोरो ने कौए को कैसे दूर भगाया ?

उत्तर: \_\_\_\_\_

4. रोता हुआ कौवा फिर कहाँ गया ?

उत्तर: \_\_\_\_\_

5. सारे कौआ ने मिलकर फिर क्या किया ?

उत्तर: \_\_\_\_\_

## उत्तर सूची

प्र.1)

1. मोर के पंख कौए ने लगाए ।
2. कौवा मोरो की टोली में जा घुसा ।
3. मोरो ने चोंच मारकर कौए को दूर भगाया ।
4. रोता हुआ कौवा फिर अपने घर वापस लौटा ।
5. सारे कौओ ने मिलकर कौए के मोर पंख नोच डाले।