



ROYAL OAKS WORLD SCHOOL

FOUNDATION WORKSHEET

Class: 5

Week: 3

Subject: English

Date: 16/04/2020

Name: _____

Code: ENG-013/16apr/20-21

1. Dear students during this time while you are at home, your school is ensuring that your academic work continues and your foundation grows stronger every day.
2. Given is a worksheet which you must complete today.
3. The Answer Key is also given at the end of the exercise. You may ask your parents to check your exercise only after you have completed the worksheet.
4. You can take a printout of the worksheet if possible or you can solve it in any exercise book.
5. You must make one notebook for all the subjects (where you can stick worksheet or you can write).
6. In case of any doubt you can ask your teachers once school will reopen.

Q.1. Complete each sentence by changing the verb given in the brackets to present tense:

- 1) Sarah (cook) _____ breakfast every morning.
- 2) Laura (live) _____ in Florida.
- 3) Paul (play) _____ the piano at the concert.
- 4) Every night I (reads) _____ my book.

- 5) I always (asks) _____ a lot of questions.
- 6) She (drive) _____ too fast!
- 7) Kara (turn) _____ on the light.
- 8) I (waves) _____ to my sister.
- 9) Zack (throw) _____ the frisbee onto the roof.
- 10) The dog (bark) _____ at the mailman.

Q.2. Complete each sentence by changing the verb given in the brackets to past tense:

- 1) I (ask) _____ a lot of questions.
- 2) She (talk) _____ too fast.
- 3) Kara (turn) _____ on the light.
- 4) Frank (answer) _____ the phone.
- 5) My mom (bake) _____ the best brownies.
- 6) Zack (toss) _____ the frisbee onto the roof.
- 7) The dog (bark) _____ at the mailman.
- 8) The band (play) _____ salsa music.
- 9) I (like) _____ that lemonade.
- 10) It must have been cold last night, because the pond (freeze) _____ over.

Answer key

Q.1. Complete each sentence by changing the verb given in the brackets to present tense:

**1) cooks 2) lives 3) plays 4) read 5) ask 6) drives 7) turns 8) wave
9) throws 10) barks.**

Q.2. Complete each sentence by changing the verb given in the brackets to past tense:

**1) asked 2) talked 3) turned 4) answered 5) baked 6) tossed 7) barked
8) played 9) liked 10) froze.**

Greetings from Royal Oaks World School

Amazon today cancelled the subscription of books and audio stories for children and students of all ages as long as schools are closed, kids everywhere can instantly stream an incredible collection of stories, including titles across six different languages.

All stories are free to stream on your desktop, laptop, phone or table using the following:

<https://stories.audible.com/start-listen>

FOUNDATION WORKSHEET**Class: 5****Week: 3****Subject: Maths****Date: 16/04/2020****Name: _____****Code: Maths-013/16apr/20-21**

1. Dear Students during this time while you are at home, your school is ensuring that your academic work continues and your foundation grows stronger every day.
2. Given is a worksheet which you must complete today.
3. The Answer Key is also given at the end of the exercise. You may ask your parents to check your Exercise only after you have completed the worksheet.
4. You can take a printout of the worksheet if possible or you can solve it in any exercise book.
5. You must make one note book for all the subjects (where you can stick worksheet or you can write).
6. In case of any doubt you can ask your teachers once school will reopen.



Maths Worksheet 013

NAME: _____

CLASS: 5 SECTION: _____ (III - Week) DATE: 16/04/2020

1) $500 + 70 + 4$

2) Half of 30

3) What is this triangle called?



4) $30 - 6$

5) What is the value of the digit 7 in the number 1726

6) Double 14

7) 5×6

8) Write down all the odd numbers from the list below
42, 37, 21, 26, 38, 63

9) Round 67 to the nearest 10.

10) What number comes halfway between 30 and 50?

11) How many nickels make 30¢?

12) The time is 4:30pm. What will the time be in half an hour?

13) How much is 3 dimes and 3 nickels?

14) What fraction of this shape is shaded?



15) I am facing north. I turn 2 half turns. Which way am I facing now?

16) How many inches in 2 feet?





Maths Worksheet 013

NAME: _____

CLASS: 5 SECTION: _____ (III - Week) DATE: 16/04/2020

Answer

1)	$500 + 70 + 4$	574
2)	Half of 30	15
3)	What is this triangle called? 	right triangle
4)	$30 - 6$	24
5)	What is the value of the digit 7 in the number 1726	700
6)	Double 14	28
7)	5×6	30
8)	Write down all the odd numbers from the list below 42, 37, 21, 26, 38, 63	37, 21, 63
9)	Round 67 to the nearest 10.	70
10)	What number comes halfway between 30 and 50?	40
11)	How many nickels make 30¢?	6
12)	The time is 4:30pm. What will the time be in half an hour?	5:00pm
13)	How much is 3 dimes and 3 nickels?	45¢
14)	What fraction of this shape is shaded? 	$\frac{3}{5}$
15)	I am facing north. I turn 2 half turns. Which way am I facing now?	north
16)	How many inches in 2 foot?	24 inches

FOUNDATION WORKSHEET

Class: 5

Subject: Science

Name: _____

Week: 3

Date: 16/04/2020

Code: SCI-013/16apr/20-21

1. Dear students during this time while you are at home, your school is ensuring that your academic work continues and your foundation grows stronger every day.
2. Given is a worksheet which you must complete today.
3. The Answer Key is also given at the end of the exercise. You may ask your parents to check your exercise only after you have completed the worksheet.
4. You can take a printout of the worksheet if possible or you can solve it in any exercise book.
5. You must make one notebook for all the subjects (where you can stick worksheet or you can write).
6. In case of any doubt you can ask your teachers once school will reopen.

SELECT THE CORRECT ANSWER FROM THE GIVEN OPTIONS.

1. Which one is a transparent object?
 - a. Stone
 - b. Reading glass
 - c. Wax paper
 - d. Dense fog
2. Light is a form of
 - a. Energy
 - b. Power
 - c. Mass
 - d. Length
3. Which of the following will not form circular shadow
 - a. A circular disk
 - b. Shoe box
 - c. Ice-cream cone
 - d. A ball
4. Shadow is formed by
 - a. Transparent object
 - b. Translucent object
 - c. Opaque object
 - d. All of these.

5. Match the following:

Column A	Column B
a. Moon	i. Translucent
b. Sun	ii. Opaque
c. Brick	iii. Reflecting surface
d. Mirror	iv. Luminous
e. Tracing paper	v. Non-luminous

6. Fill in the blanks with suitable word.

1. _____ object do not cast any shadow.
2. Moon is a _____ object.
3. Shadows give us information about the _____ of the object.
4. Solar and Lunar eclipse are examples of _____ formation in nature.
5. A _____ changes the direction of light that falls on it.

7. When does a lunar eclipse occur?

8. Draw diagram of Lunar eclipse.

9. Draw diagram of Solar eclipse.


10. Classify the following as transparent, translucent and opaque object.

Brick, butter paper, air, cardboard, metals, book, smoked glass, water, cellophane paper.

Transparent	Translucent	Opaque

Answer key

1. (b)
2. (a)
3. (b)
4. (c)
5. (a) – (v), (b) – (iv), (c) – (ii), (d) – (iii), (e) – (i).
6. (a) Transparent (b) Non-luminous (c) Shape (d) Shadow (e) Mirror.
7. A lunar eclipse occurs when the earth is between the sun and the moon in a straight line. The shadow of the earth is cast on the moon.
- 8.



lunar eclipse

9.



solar eclipse

10.

Transparent	Translucent	Opaque
Air	Butter paper	Brick
Water	Smoked glass	Cardboard
Cellophane paper		Metals



ROYAL OAKS WORLD SCHOOL

FOUNDATION WORKSHEET

Class: 5


Week: 3

Subject: HINDI

Date: 16/04/2020

Name: _____ Code: HIN-013/16apr/20-21

1. Dear students during this time while you are at home, your school is ensuring that your academic work Continues and your foundation grows stronger every day.
2. Given is a worksheet which you must complete today.
3. The Answer Key is also given at the end of the exercise. You may ask your parents to check your Exercise only after you have completed the worksheet.
4. You can take a printout of the worksheet if possible or you can solve it in any exercise book.
5. You must make one note book for all the subjects (where you can stick worksheet or you can write).
6. In case of any doubt you can ask your teachers once school will reopen.



प्र.1) दिए गए शब्दों का वर्ण- विच्छेद कीजिए.

1. बंदर = — + — + —
2. सोचना = — + — + —
3. अचानक = — + — + — + —
4. पलटना = — + — + — + —
5. निडर = — + — + —

प्र.2) सर्वनाम शब्दों को छाँटकर लिखिए.

1. तुम खाना खा लो । = _____
2. यह पुस्तक मेरी है। = _____
3. वह पढ़ रहा है। = _____
4. उस कमरे में कौन है ? = _____
5. इस टोकरी में फल है। = _____

प्र.3) विशेषण शब्दों को रेखांकित कीजिए.

1. मोर सुंदर है।
2. तुम बहुत होशियार हो।
3. समुद्र विशाल है।
4. वह फूल अच्छा लगता है।
5. घोड़ा तेज़ दौड़ता है।

प्र.4) सही विलोम शब्द पर गोला लगाए.

1. सुंदर - बदसूरत, असुंदर
2. धरती - गगन, आकाश
3. गर्म - सर्द, ठंडा
4. प्रकाश - तम, अंधकार

उत्तर सूची

प्र.1)

1. बंदर = बं + द + र
2. सोचना = सो + च + ना
3. अचानक = अ + चा + न + क
4. पलटना = प + ल + ट + ना
5. निडर = नि + ड + र

प्र.2)

1. तुम
2. यह
3. वह
4. उस
5. इस

प्र.3)

1. मोर सुंदर है।
2. तुम बहुत होशियार हो।
3. समुद्र विशाल है।
4. वह फूल अच्छा लगता है।
5. घोड़ा तेज दौड़ता है।

प्र.4)

1. सुंदर - बदसूरत, असुंदर
2. धरती - गगन, आकाश
3. गर्म - सर्द, ठंडा
4. प्रकाश - तम, अंधकार