



ROYAL OAKS WORLD SCHOOL

FOUNDATION WORKSHEET

Class: 5

Week: 3

Subject: English

Date: 14/04/2020

Name: _____

Code: ENG-011/14apr/20-21

1. Dear students during this time while you are at home, your school is ensuring that your academic work continues and your foundation grows stronger every day.
2. Given is a worksheet which you must complete today.
3. The Answer Key is also given at the end of the exercise. You may ask your parents to check your exercise only after you have completed the worksheet.
4. You can take a printout of the worksheet if possible or you can solve it in any exercise book.
5. You must make one notebook for all the subjects (where you can stick worksheet or you can write).
6. In case of any doubt you can ask your teachers once school will reopen.

Q.1. Fill in the blanks with the appropriate form of the verb in brackets:

- 1) Vipul a fantastic over. (to bowl - Present Perfect Tense)
- 2) Rachel the piano for the school concert. (to play - Present Continuous Tense)
- 3) Time and tide for no man. (to wait - Simple Present Tense)
- 4) The mayor to beautify Mumbai. (to decide - Present Perfect Tense)
- 5) Agriculture carried out near forests. (to be - Present Continuous Tense)
- 6) The three friends cricket for the last ten years. (to play - Present Perfect Continuous Tense)
- 7) An idle mind the devil's workshop. (to be - Simple Present Tense)
- 8) Sarah stamps for the last two years. (to collect - Present Perfect Continuous Tense)
- 9) Payal for her skit. (to practise - Present Continuous Tense)
- 10) The people since last Tuesday. (to riot - Present Perfect Continuous Tense)

Q.2. Fill in the blanks with the correct form of the Past Tense of the verbs given in brackets:

- 1) Shaila swimming during the vacations. (to learn - Past Perfect Continuous Tense)
- 2) The doctor the patient that morning. (to visit - Past Perfect Tense)

3) We T.V when the wall collapsed. (to watch - Past Continuous Tense)

4) He on the doctor's door. (to bang - Simple Past Tense)

5) Even in ancient times, Indians medicine. (to study - Past Perfect Tense)

6) My friend at the gym when she got the call. (to be - Simple Past Tense)

7) Pushpa her project for a week, before her cousins took her to Goa. (write - Past Perfect Continuous Tense)

8) He a little and at him. (smile, look - Simple Past Tense)

9) Meena (just) the club when she fell ill. (to join - Past Perfect Tense)

10) Birbal jokes when Akbar entered. (to tell - Past Perfect Continuous Tense)

Answer key

Q.1. Fill in the blanks with the appropriate form of the verb in brackets:

1) has bowled, 2) is playing, 3) wait, 4) has decided, 5) is being,
6) have been playing, 7) is, 8) has been collecting, 9) is practising,
10) have been rioting.

Q.2. Fill in the blanks with the correct form of the Past Tense of the verbs given in brackets:

1) has been learning, 2) had visited, 3) were watching,
4) banged, 5) had studied, 6) was, 7) had been writing,
8) smiled, looked, 9) had just joined, 10) had been telling.

Greetings from Royal Oaks World School

Amazon today cancelled the subscription of books and audio stories for children and students of all ages as long as schools are closed, kids everywhere can instantly stream an incredible collection of stories, including titles across six different languages.

All stories are free to stream on your desktop, laptop, phone or table using the following:

<https://stories.audible.com/start-listen>

FOUNDATION WORKSHEET**Class: 5****Week: 3****Subject: Maths****Date: 14/04/2020****Name: _____****Code: Maths-011/14apr/20-21**


1. Dear Students during this time while you are at home, your school is ensuring that your academic work continues and your foundation grows stronger every day.
2. Given is a worksheet which you must complete today.
3. The Answer Key is also given at the end of the exercise. You may ask your parents to check your Exercise only after you have completed the worksheet.
4. You can take a printout of the worksheet if possible or you can solve it in any exercise book.
5. You must make one note book for all the subjects (where you can stick worksheet or you can write).
6. In case of any doubt you can ask your teachers once school will reopen.



Maths Worksheet 11

NAME: _____

CLASS: 5 SECTION: _____ (III - Week) DATE: 14/04/2020

1)	Work out $0.7 + 0.8$	
2)	Write the Roman numerals XXXVII in figures.	
3)	Which of these fractions is equivalent to a half? $\frac{1}{3}$ $\frac{2}{5}$ $\frac{3}{6}$ $\frac{4}{9}$ $\frac{5}{8}$	
4)	$42 \div 6$	
5)	Write down the number eighteen thousand two hundred seven	
6)	Fill in the missing number $4081 = 4001 + \underline{\hspace{1cm}}$	
7)	Write down two numbers with a sum of 9 and a difference of 1.	
8)	How many vertices in a triangular pyramid? 	
9)	Write all down the factors of 15. _____	
10)	Add together $6\frac{1}{2}$, 5 and $3\frac{1}{2}$	
11)	I have \$10. I spend \$2.70. How much do I have left?	
12)	What is the value of $x + 7$ when $x = 3$?	
13)	What is $\frac{1}{3}$ of 21?	
14)	A plane journey takes $6\frac{1}{2}$ hours. If I set off at 8:40am, what time will I arrive?	pm
15)	A pen costs \$4.60. How much will 2 pens cost?	
16)	A piece of rope measuring 4m is cut into 8 equal lengths. How long will each piece be?	




Maths Worksheet 11

NAME: _____

CLASS: 5 SECTION: _____ (III - Week) DATE: 14/04/2020

Answer

1)	Work out $0.7 + 0.8$	1.5
2)	Write the Roman numerals XXXVII in figures.	37
3)	Which of these fractions is equivalent to a half? $\frac{1}{3}$ $\frac{2}{5}$ $\frac{3}{6}$ $\frac{4}{9}$ $\frac{5}{8}$	$\frac{3}{6}$
4)	$42 \div 6$	7
5)	Write down the number eighteen thousand two hundred seven	18,207
6)	Fill in the missing number $4081 = 4001 + \underline{\hspace{1cm}}$	80
7)	Write down two numbers with a sum of 9 and a difference of 1.	4 and 5
8)	How many vertices in a triangular pyramid? 	4
9)	Write all down the factors of 15. $\underline{\hspace{1cm}}$ $\underline{\hspace{1cm}}$ $\underline{\hspace{1cm}}$ $\underline{\hspace{1cm}}$	1, 3, 5, and 15
10)	Add together $6\frac{1}{2}$, 5 and $3\frac{1}{2}$	15
11)	I have \$10. I spend \$2.70. How much do I have left?	\$7.30
12)	What is the value of $x + 7$ when $x = 3$?	10
13)	What is $\frac{1}{3}$ of 21?	7
14)	A plane journey takes $6\frac{1}{2}$ hours. If I set off at 8:40am, what time will I arrive?	3:10pm
15)	A pen costs \$4.60. How much will 2 pens cost?	\$9.20
16)	A piece of rope measuring 4m is cut into 8 equal lengths. How long will each piece be?	50cm

FOUNDATION WORKSHEET

Class: 5

Subject: Science

Name: _____

Week: 3

Date: 14/04/2020

Code: SCI-011/14apr/20-21

1. Dear students during this time while you are at home, your school is ensuring that your academic work continues and your foundation grows stronger every day.
2. Given is a worksheet which you must complete today.
3. The Answer Key is also given at the end of the exercise. You may ask your parents to check your exercise only after you have completed the worksheet.
4. You can take a printout of the worksheet if possible or you can solve it in any exercise book.
5. You must make one notebook for all the subjects (where you can stick worksheet or you can write).
6. In case of any doubt you can ask your teachers once school will reopen.

I. Fill in the blanks:

- (i) _____ is the largest planet.
- (ii) Most _____ have their own moons.
- (iii) _____ is the nearest planet from the Sun.
- (iv) The _____ have their own light.
- (v) The _____ is a big ball of rocks.

II. Put a tick (✓) against the correct sentences and cross (X) against the wrong sentences:

- (i) The Sun is the largest star. _____
- (ii) The small visible part of the moon is called the crescent moon. _____
- (iii) The moon completes one round of the Earth in about 28 days. _____
- (iv) Planets do not move at all. _____
- (v) The Earth is a part of the solar system. _____
- (vi) The moon gives light to the Earth. _____

III. Answer the following questions: _____

(i) What is the solar system? _____

(ii) What rotates around the Earth?

(iii) What is known as the full moon?

(iv) When is the moon not visible at all?

(v) Why do stars appear so smaller?

IV. Match the column:

(i) Earth

(a) a big rocky ball

(ii) Gibbous moon

(b) a planet with life on it

(iii) Moon

(c) more than half moon visible

(iv) Pluto

(d) a star

(v) Sun

(e) a planet

Answers:

- I. (i) Jupiter
(ii) planets
(iii) Mercury
(iv) stars
(v) moon

- II. (i) X
(ii) ✓
(iii) ✓
(iv) X
(v) ✓
(vi) X

III. (i) The Sun and its nine planets along with their moons form a family called the solar system.

(ii) Moon rotates around the Earth.

(iii) When the moon appears completely, this is known as full moon.

(iv) The moon is not visible at all when the moon is between the Sun and the Earth.

(v) Stars appear so smaller because they are farther away than the Sun.

IV.

(i) Earth	(b) a planet with life on it
(ii) Gibbous moon	(c) more than half moon visible
(iii) Moon	(a) a big rocky ball
(iv) Pluto	(e) a planet
(v) Sun	(d) a star



ROYAL OAKS WORLD SCHOOL

FOUNDATION WORKSHEET

Class: 5

Week: 3


Subject: HINDI

Date: 14/04/2020

Name: _____

Code: HIN-011/14apr/20-21

1. Dear students during this time while you are at home, your school is ensuring that your academic work Continues and your foundation grows stronger every day.
2. Given is a worksheet which you must complete today.
3. The Answer Key is also given at the end of the exercise. You may ask your parents to check your Exercise only after you have completed the worksheet.
4. You can take a printout of the worksheet if possible or you can solve it in any exercise book.
5. You must make one note book for all the subjects (where you can stick worksheet or you can write).
6. In case of any doubt you can ask your teachers once school will reopen.



प्र.1) नीचे दिए गए शब्दों के समान ध्वनि वाले शब्द लिखिए.

1. प्यारा = _____
2. गीत = _____
3. ईसाई = _____
4. मिल = _____
5. निवासी = _____
6. जान = _____
7. चोटी = _____
8. हुआ = _____
9. हँसती = _____
10. खेती = _____

प्र.2) निम्नलिखित युग्म शब्दों को पूर्ण कीजिए.

1. दुख = _____
2. पेड़ = _____
3. माता = _____
4. भाई = _____
5. नर = _____
6. दिन = _____
7. खेत = _____
8. घर = _____
9. आदर = _____
10. धूप = _____

उत्तर सूची

प्र.1)

1. न्यारा
2. मीत
3. भाई
4. दिल
5. भारतवासी
6. मान
7. रोटी
8. दुआ
9. बस्ती
10. ठेली

प्र.2)

1. सुख
2. पौधे
3. पिता
4. बहन
5. नारी
6. रात
7. खलिहान
8. बाहर
9. सत्कार
10. छाँव