



ROYAL OAKS WORLD SCHOOL

FOUNDATION WORKSHEET

Class: 5

Week: 3

Subject: English

Date: 13/04/2020

Name: _____

Code: ENG-010/13apr/20-21

1. Dear students during this time while you are at home, your school is ensuring that your academic work continues and your foundation grows stronger every day.
2. Given is a worksheet which you must complete today.
3. The Answer Key is also given at the end of the exercise. You may ask your parents to check your exercise only after you have completed the worksheet.
4. You can take a printout of the worksheet if possible or you can solve it in any exercise book.
5. You must make one notebook for all the subjects (where you can stick worksheet or you can write).
6. In case of any doubt you can ask your teachers once school will reopen.

Q.1. Use the verbs given in the brackets in their correct tense:

- 1) A real friend you with his presence. (*to warm - simple present tense*)
- 2) We to choose our friends with care. (*to have - simple present tense*)
- 3) I this encounter with the man. (*to want - simple past tense*)

- 4) The day begun to take shape. (*to begin - past present*)
- 5) I myself through so many years of letters. (*to face - past perfect continuous tense*)
- 6) When I the dishes, I went out. (*to finish - past perfect*)
- 7) I older. (*to grow - present continuous tense*)
- 8) Even if there is an initial loss, I it under my own name. (*to sell - simple future tense*)
- 9) She many people in Aurangabad. (*to help - present perfect tense*)
- 10) By 2021, he as top executive in a top firm. (*to work - future perfect continuous*)

Q.2. Identify the tense of the verb in the following sentences:

- 1) He had received his education at the famous university of Takshashila.
- 2) His visage was noble and conduct righteous.
- 3) He listened to them patiently and gave judgements without partiality.
- 4) They were all praise for him.
- 5) Computers form a vital part of remote-controlled missions.
- 6) The habit of reading is one of the greatest resources of mankind.
- 7) You had no business to do anything of the sort.
- 8) The child had evidently been crying.
- 9) I've just found my brooch hanging to my black lace shawl.
- 10) I'll forgive you and we'll start square again.

Answer key

Q.1. Use the verbs given in the brackets in their correct tense:

- 1) warms 2) have 3) wanted 4) had begun 5) had been facing
6) had finished 7) am growing 8) will sell 9) has helped
10) shall have been.

Q.2. Identify the tense of the verb in the following sentences:

- 1) had received - Past Perfect Tense
2) was - Simple Past Tense
3) listened - Simple Past tense, gave - Simple Past Tense
4) were - Simple Past Tense
5) form - Simple Present Tense
6) is - Simple Present Tense
7) had - Simple Past Tense
8) had been crying - Past Perfect Progressive Tense
9) have found - Present Perfect Tense
10) will forgive - Simple Future Tense, will start - Simple Future Tense.

Greetings from Royal Oaks World School

Amazon today cancelled the subscription of books and audio stories for children and students of all ages as long as schools are closed, kids everywhere can instantly stream an incredible collection of stories, including titles across six different languages.

All stories are free to stream on your desktop, laptop, phone or table using the following:

<https://stories.audible.com/start-listen>

FOUNDATION WORKSHEET**Class: 5****Week: 3****Subject: Maths****Date: 13/04/2020****Name: _____****Code: Maths-010/13apr/20-21**



1. Dear Students during this time while you are at home, your school is ensuring that your academic work continues and your foundation grows stronger every day.
2. Given is a worksheet which you must complete today.
3. The Answer Key is also given at the end of the exercise. You may ask your parents to check your Exercise only after you have completed the worksheet.
4. You can take a printout of the worksheet if possible or you can solve it in any exercise book.
5. You must make one note book for all the subjects (where you can stick worksheet or you can write).
6. In case of any doubt you can ask your teachers once school will reopen.



Maths Worksheet 010

NAME: _____

CLASS: 5 SECTION: _____ (III - Week) DATE: 13/04/2020

1)	Write down 3 odd numbers that add up to 19	
2)	$___ - 4 = 11$	
3)	Write down the number one thousand three hundred and twenty.	
4)	$21 \div 3$	
5)	Round 827 to the nearest 100.	
6)	What is the perimeter of this rectangle? 	
7)	What is the next number in this sequence? 83, 80, 77, 74, 71, $___$	
8)	What is the time in digital? 	
9)	Write down a multiple of 4 between 29 and 37	
10)	I have £1. I spend 32p. How much do I have left?	
11)	A ladder is 5 $______$ tall. Which word is missing? mm cm m km	
12)	How many FIVES makes 6 TENS?	
13)	What number comes halfway between 7 and 8?	
14)	How many wheels on 8 cars?	
15)	Half of 52	
16)	The date is the 15 th August. What was the date 2 weeks ago?	

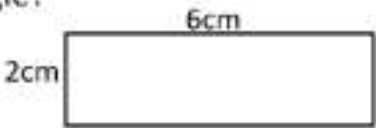



Maths Worksheet 10

NAME: _____

CLASS: 5 SECTION: _____ (III - Week) DATE: 13/04/2020

Answer

1)	Write down 3 odd numbers that add up to 19	e.g. 1, 3, 15
2)	___ - 4 = 11	15
3)	Write down the number one thousand three hundred twenty.	1320
4)	$21 \div 3$	7
5)	Round 827 to the nearest 100.	800
6)	What is the perimeter of this rectangle? 	16cm
7)	What is the next number in this sequence? 83, 80, 77, 74, 71, ___	68
8)	What is the time in digital? 	5:05
9)	Write down a multiple of 4 between 29 and 37	32 or 36
10)	I have £1. I spend 32p. How much do I have left?	68p
11)	A ladder is 5 _____ tall. Which word is missing? mm cm m km	m
12)	How many FIVES makes 6 TENS?	12
13)	What number comes halfway between 7 and 8?	$7 \frac{1}{2}$
14)	How many wheels on 8 cars?	32
15)	Half of 52	26
16)	The date is the 15 th August. What was the date 2 weeks ago?	1 st August

FOUNDATION WORKSHEET

Class: 5

Subject: Science

Name: _____

Week: 3

Date: 13/04/2020

Code: SCI-010/13apr/20-21

1. Dear students during this time while you are at home, your school is ensuring that your academic work continues and your foundation grows stronger every day.
2. Given is a worksheet which you must complete today.
3. The Answer Key is also given at the end of the exercise. You may ask your parents to check your exercise only after you have completed the worksheet.
4. You can take a printout of the worksheet if possible or you can solve it in any exercise book.
5. You must make one notebook for all the subjects (where you can stick worksheet or you can write).
6. In case of any doubt you can ask your teachers once school will reopen.

Q1. PERFORM THE FOLLOWING EXPERIMENT AND NOTE DOWN YOUR OBSERVATION. REWRITE EVERYTHING IN PROPER FORM.

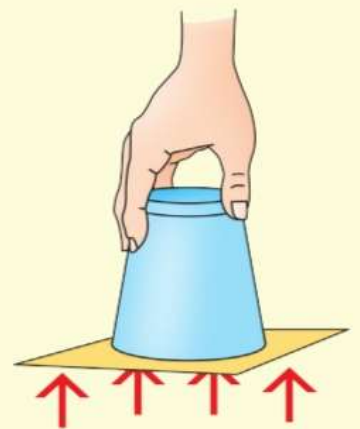
Aim: To show that air exerts pressure in all directions

Materials required: a glass of water, a piece of cardboard

Procedure:

- Take a glass of water filled up to the brim.
- Cover the glass with a strong piece of cardboard.
- Be careful that there are no air bubbles in the glass.
- Keep your hand on the cardboard and turn the glass upside down.
- Now, remove your hand slowly from the cardboard.

What do you observe?



OBSERVATION:

Q2. ANSWER THE FOLLOWING QUESTIONS:

1. Rahul's mother always switches off the car's engine if she has to wait at a traffic signal for more than a minute. Do you think her action is right? Give reason.

2. Tina collected the leaves of a rose plant as she wanted to grow a new plant from them. Will she be able to grow new rose plant from them? What should she do instead?

To get more information on types of roots, click on the link below:

<https://youtu.be/IF1YmlXw9m0>

Answer key

Q1.

Aim: To show that air exerts pressure in all directions

Materials required: a glass of water, a piece of cardboard

Procedure:

- Take a glass of water filled up to the brim.
- Cover the glass with a strong piece of cardboard.
- Be careful that there are no air bubbles in the glass.
- Keep your hand on the cardboard and turn the glass upside down.
- Now, remove your hand slowly from the cardboard.



What do you observe?

Observation and conclusion: You will observe that the water inside the glass does not flow out. This is because of the pressure of air exerted from below the glass. The pressure of air in upward direction is more than the pressure of the water in downward direction.

Similarly, if air bubbles are left in the glass, then air pressure would be formed inside the glass. This air pressure exerted inside in downward direction would be more than the air pressure outside in upward direction. Hence, the cardboard would fall off and the water would spill out.

Q2.

1. Yes, her action is right. When she switches off the engine of the car, she saves petrol and conserves energy.
2. Tina will not be able to grow a new rose plant using leaves. She should use the stem of rose plant to grow a new plant.



ROYAL OAKS WORLD SCHOOL

FOUNDATION WORKSHEET

Class: 5


Week: 3

Subject: HINDI

Date: 13/04/2020

Name: _____ Code: HIN-010/13apr/20-21

1. Dear students during this time while you are at home, your school is ensuring that your academic work Continues and your foundation grows stronger every day.
2. Given is a worksheet which you must complete today.
3. The Answer Key is also given at the end of the exercise. You may ask your parents to check your Exercise only after you have completed the worksheet.
4. You can take a printout of the worksheet if possible or you can solve it in any exercise book.
5. You must make one note book for all the subjects (where you can stick worksheet or you can write).
6. In case of any doubt you can ask your teachers once school will reopen.



प्र.1) नीचे दिए गए अनेक शब्दों के लिए एक शब्द लिखो.

1. जो सच बोलता है। = _____
2. जो चुगली करता है। = _____
3. जो मीठा बोलता है। = _____
4. जो झगड़ा करता है। = _____
5. जो न डरता हो। = _____
6. जहाँ ऋषि मुनि रहते हों। = _____
7. जो वीर हो। = _____
8. जो नगर में रहत हो। = _____
9. जिसका कोई अंत न हो। = _____
10. पूजा के योग्य। = _____

प्र.2) निम्नलिखित अंकों के हिंदी में नाम लिखिए

- 1) 11 = _____
- 2) 12 = _____
- 3) 13 = _____
- 4) 14 = _____
- 5) 15 = _____
- 6) 16 = _____
- 7) 17 = _____
- 8) 18 = _____
- 9) 19 = _____
- 10) 20 = _____

उत्तर सूची

प्र.1)

1. सत्यवादी
2. चुगलखोर
3. मृदुभाषी
4. झगड़ालू
5. निडर
6. आश्रम
7. बहादुर
8. नागरिक
9. अनंत
10. पूजनीय

प्र.2)

1. ग्यारह
2. बारह
3. तेरह
4. चौदह
5. पन्द्रह
6. सोलह
7. सत्रह
8. अठारह
9. उन्नीस
10. बीस